



Match each equation to the answer and write the answer.

**Answers**

Ex)  $\frac{1}{8} + \frac{1}{8} + \frac{1}{8} + \frac{1}{8} + \frac{1}{8}$



Ex.     A    

1)  $\frac{1}{4} + \frac{1}{4} + \frac{1}{4}$



1. \_\_\_\_\_

2)  $\frac{1}{10} + \frac{1}{10} + \frac{1}{10} + \frac{1}{10} + \frac{1}{10} + \frac{1}{10}$




2. \_\_\_\_\_

3)  $\frac{1}{6} + \frac{1}{6}$




3. \_\_\_\_\_

4)  $\frac{1}{8} + \frac{1}{8} + \frac{1}{8} + \frac{1}{8} + \frac{1}{8} + \frac{1}{8} + \frac{1}{8}$




4. \_\_\_\_\_

5)  $\frac{1}{6} + \frac{1}{6} + \frac{1}{6} + \frac{1}{6}$



5. \_\_\_\_\_

6)  $\frac{1}{12} + \frac{1}{12} + \frac{1}{12} + \frac{1}{12} + \frac{1}{12}$



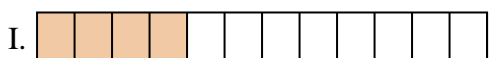
6. \_\_\_\_\_

7)  $\frac{1}{8} + \frac{1}{8} + \frac{1}{8} + \frac{1}{8}$



7. \_\_\_\_\_

8)  $\frac{1}{3} + \frac{1}{3}$



8. \_\_\_\_\_

9)  $\frac{1}{6} + \frac{1}{6} + \frac{1}{6} + \frac{1}{6} + \frac{1}{6}$




9. \_\_\_\_\_

10)  $\frac{1}{12} + \frac{1}{12} + \frac{1}{12} + \frac{1}{12}$



10. \_\_\_\_\_

11)  $\frac{1}{10} + \frac{1}{10} + \frac{1}{10} + \frac{1}{10}$




11. \_\_\_\_\_

12)  $\frac{1}{5} + \frac{1}{5} + \frac{1}{5} + \frac{1}{5}$




12. \_\_\_\_\_

13)  $\frac{1}{4} + \frac{1}{4}$




13. \_\_\_\_\_

14)  $\frac{1}{8} + \frac{1}{8} + \frac{1}{8} + \frac{1}{8} + \frac{1}{8} + \frac{1}{8}$



14. \_\_\_\_\_

15)  $\frac{1}{5} + \frac{1}{5}$



15. \_\_\_\_\_



Match each equation to the answer and write the answer.


Ex)  $\frac{1}{8} + \frac{1}{8} + \frac{1}{8} + \frac{1}{8} + \frac{1}{8}$



Answers

Ex.     **A**    

1)  $\frac{1}{4} + \frac{1}{4} + \frac{1}{4}$



1.     **F**    

2)  $\frac{1}{10} + \frac{1}{10} + \frac{1}{10} + \frac{1}{10} + \frac{1}{10} + \frac{1}{10}$



2.     **P**    

3)  $\frac{1}{6} + \frac{1}{6}$




3.     **N**    

4)  $\frac{1}{8} + \frac{1}{8} + \frac{1}{8} + \frac{1}{8} + \frac{1}{8} + \frac{1}{8} + \frac{1}{8}$




4.     **O**    

5)  $\frac{1}{6} + \frac{1}{6} + \frac{1}{6} + \frac{1}{6}$




5.     **H**    

6)  $\frac{1}{12} + \frac{1}{12} + \frac{1}{12} + \frac{1}{12} + \frac{1}{12}$




6.     **J**    

7)  $\frac{1}{8} + \frac{1}{8} + \frac{1}{8} + \frac{1}{8}$



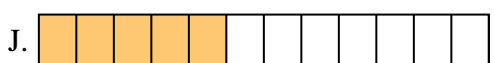
7.     **C**    

8)  $\frac{1}{3} + \frac{1}{3}$



8.     **K**    

9)  $\frac{1}{6} + \frac{1}{6} + \frac{1}{6} + \frac{1}{6} + \frac{1}{6}$




9.     **L**    

10)  $\frac{1}{12} + \frac{1}{12} + \frac{1}{12} + \frac{1}{12}$



10.     **I**    

11)  $\frac{1}{10} + \frac{1}{10} + \frac{1}{10} + \frac{1}{10}$




11.     **D**    

12)  $\frac{1}{5} + \frac{1}{5} + \frac{1}{5} + \frac{1}{5}$




12.     **B**    

13)  $\frac{1}{4} + \frac{1}{4}$




13.     **M**    

14)  $\frac{1}{8} + \frac{1}{8} + \frac{1}{8} + \frac{1}{8} + \frac{1}{8} + \frac{1}{8}$



14.     **G**    

15)  $\frac{1}{5} + \frac{1}{5}$



15.     **E**