




Match each equation to the answer and write the answer.


**Answers**

Ex)  $\frac{1}{10} + \frac{1}{10}$




Ex. **G**

1)  $\frac{1}{5} + \frac{1}{5} + \frac{1}{5}$




1. \_\_\_\_\_

2)  $\frac{1}{10} + \frac{1}{10} + \frac{1}{10} + \frac{1}{10} + \frac{1}{10} + \frac{1}{10}$




2. \_\_\_\_\_

3)  $\frac{1}{8} + \frac{1}{8} + \frac{1}{8}$




3. \_\_\_\_\_

4)  $\frac{1}{6} + \frac{1}{6} + \frac{1}{6} + \frac{1}{6} + \frac{1}{6}$



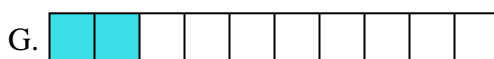
4. \_\_\_\_\_

5)  $\frac{1}{4} + \frac{1}{4}$



6. \_\_\_\_\_

6)  $\frac{1}{3} + \frac{1}{3}$




7. \_\_\_\_\_

7)  $\frac{1}{12} + \frac{1}{12} + \frac{1}{12} + \frac{1}{12} + \frac{1}{12}$




8. \_\_\_\_\_

8)  $\frac{1}{10} + \frac{1}{10} + \frac{1}{10} + \frac{1}{10} + \frac{1}{10} + \frac{1}{10} + \frac{1}{10}$



9. \_\_\_\_\_

9)  $\frac{1}{8} + \frac{1}{8}$




10. \_\_\_\_\_

10)  $\frac{1}{10} + \frac{1}{10} + \frac{1}{10} + \frac{1}{10}$




11. \_\_\_\_\_

11)  $\frac{1}{10} + \frac{1}{10} + \frac{1}{10} + \frac{1}{10} + \frac{1}{10}$



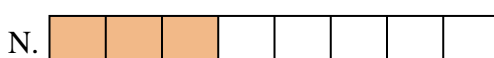
12. \_\_\_\_\_

12)  $\frac{1}{5} + \frac{1}{5} + \frac{1}{5} + \frac{1}{5}$



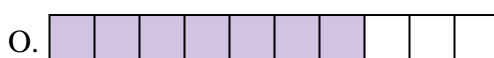
13. \_\_\_\_\_

13)  $\frac{1}{4} + \frac{1}{4} + \frac{1}{4}$




14. \_\_\_\_\_

14)  $\frac{1}{6} + \frac{1}{6} + \frac{1}{6} + \frac{1}{6}$



15. \_\_\_\_\_

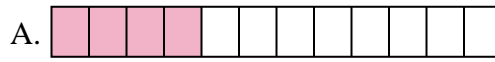
15)  $\frac{1}{12} + \frac{1}{12} + \frac{1}{12} + \frac{1}{12}$





Match each equation to the answer and write the answer.

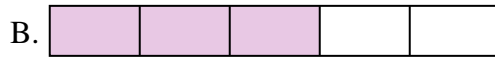
Ex)  $\frac{1}{10} + \frac{1}{10}$



Answers


Ex.     **G**    

1)  $\frac{1}{5} + \frac{1}{5} + \frac{1}{5}$



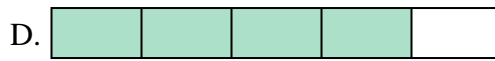
1.     **B**    

2)  $\frac{1}{10} + \frac{1}{10} + \frac{1}{10} + \frac{1}{10} + \frac{1}{10} + \frac{1}{10}$




2.     **E**    

3)  $\frac{1}{8} + \frac{1}{8} + \frac{1}{8}$



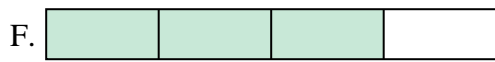
3.     **N**    

4)  $\frac{1}{6} + \frac{1}{6} + \frac{1}{6} + \frac{1}{6} + \frac{1}{6}$



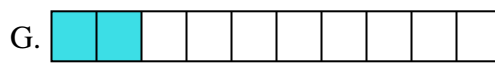
4.     **I**    

5)  $\frac{1}{4} + \frac{1}{4}$



5.     **C**    

6)  $\frac{1}{3} + \frac{1}{3}$



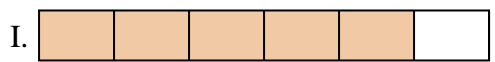
6.     **H**    

7)  $\frac{1}{12} + \frac{1}{12} + \frac{1}{12} + \frac{1}{12} + \frac{1}{12}$



7.     **J**    

8)  $\frac{1}{10} + \frac{1}{10} + \frac{1}{10} + \frac{1}{10} + \frac{1}{10} + \frac{1}{10} + \frac{1}{10}$



8.     **O**    

9)  $\frac{1}{8} + \frac{1}{8}$



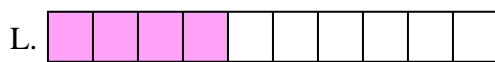
9.     **K**    

10)  $\frac{1}{10} + \frac{1}{10} + \frac{1}{10} + \frac{1}{10}$



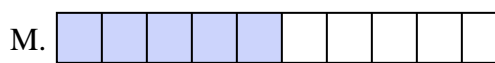
10.     **L**    

11)  $\frac{1}{10} + \frac{1}{10} + \frac{1}{10} + \frac{1}{10} + \frac{1}{10}$



11.     **M**    

12)  $\frac{1}{5} + \frac{1}{5} + \frac{1}{5} + \frac{1}{5}$



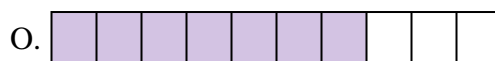
12.     **D**    

13)  $\frac{1}{4} + \frac{1}{4} + \frac{1}{4}$




13.     **F**    

14)  $\frac{1}{6} + \frac{1}{6} + \frac{1}{6} + \frac{1}{6}$



14.     **P**    

15)  $\frac{1}{12} + \frac{1}{12} + \frac{1}{12} + \frac{1}{12}$



15.     **A**