




Match each equation to the answer and write the answer.


Answers

Ex) $\frac{1}{12} + \frac{1}{12} + \frac{1}{12}$




Ex. N

1) $\frac{1}{6} + \frac{1}{6} + \frac{1}{6} + \frac{1}{6} + \frac{1}{6}$



1. _____

2) $\frac{1}{8} + \frac{1}{8} + \frac{1}{8} + \frac{1}{8} + \frac{1}{8}$




2. _____

3) $\frac{1}{5} + \frac{1}{5}$




3. _____

4) $\frac{1}{3} + \frac{1}{3}$



4. _____

5) $\frac{1}{10} + \frac{1}{10} + \frac{1}{10} + \frac{1}{10} + \frac{1}{10} + \frac{1}{10} + \frac{1}{10} + \frac{1}{10}$



5. _____

6) $\frac{1}{5} + \frac{1}{5} + \frac{1}{5} + \frac{1}{5}$




6. _____

7) $\frac{1}{4} + \frac{1}{4}$



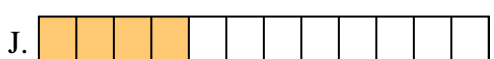
7. _____

8) $\frac{1}{6} + \frac{1}{6}$



8. _____

9) $\frac{1}{10} + \frac{1}{10} + \frac{1}{10} + \frac{1}{10} + \frac{1}{10}$




9. _____

10) $\frac{1}{6} + \frac{1}{6} + \frac{1}{6}$



10. _____

11) $\frac{1}{8} + \frac{1}{8} + \frac{1}{8}$



11. _____

12) $\frac{1}{12} + \frac{1}{12} + \frac{1}{12} + \frac{1}{12}$



12. _____

13) $\frac{1}{6} + \frac{1}{6} + \frac{1}{6} + \frac{1}{6}$




13. _____

14) $\frac{1}{10} + \frac{1}{10}$



14. _____

15) $\frac{1}{12} + \frac{1}{12} + \frac{1}{12} + \frac{1}{12} + \frac{1}{12} + \frac{1}{12} + \frac{1}{12}$




15. _____



Match each equation to the answer and write the answer.


Ex) $\frac{1}{12} + \frac{1}{12} + \frac{1}{12}$



Answers


Ex. **N**

1) $\frac{1}{6} + \frac{1}{6} + \frac{1}{6} + \frac{1}{6} + \frac{1}{6}$



1. **I**

2) $\frac{1}{8} + \frac{1}{8} + \frac{1}{8} + \frac{1}{8} + \frac{1}{8}$




2. **C**

3) $\frac{1}{5} + \frac{1}{5}$




3. **D**

4) $\frac{1}{3} + \frac{1}{3}$



4. **M**

5) $\frac{1}{10} + \frac{1}{10} + \frac{1}{10} + \frac{1}{10} + \frac{1}{10} + \frac{1}{10} + \frac{1}{10} + \frac{1}{10}$



5. **F**

6) $\frac{1}{5} + \frac{1}{5} + \frac{1}{5} + \frac{1}{5}$




6. **A**

7) $\frac{1}{4} + \frac{1}{4}$




7. **E**

8) $\frac{1}{6} + \frac{1}{6}$



8. **B**

9) $\frac{1}{10} + \frac{1}{10} + \frac{1}{10} + \frac{1}{10} + \frac{1}{10}$




9. **P**

10) $\frac{1}{6} + \frac{1}{6} + \frac{1}{6}$



10. **G**

11) $\frac{1}{8} + \frac{1}{8} + \frac{1}{8}$



11. **L**

12) $\frac{1}{12} + \frac{1}{12} + \frac{1}{12} + \frac{1}{12}$



12. **J**

13) $\frac{1}{6} + \frac{1}{6} + \frac{1}{6} + \frac{1}{6}$




13. **K**

14) $\frac{1}{10} + \frac{1}{10}$



14. **O**

15) $\frac{1}{12} + \frac{1}{12} + \frac{1}{12} + \frac{1}{12} + \frac{1}{12} + \frac{1}{12} + \frac{1}{12}$



15. **H**