

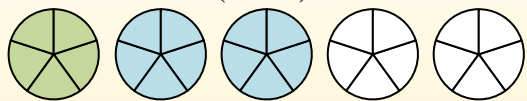


Use the visual model to solve each problem.

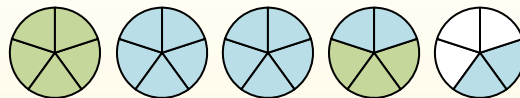
$$1 \frac{3}{5} + 2 \frac{4}{5} = ?$$



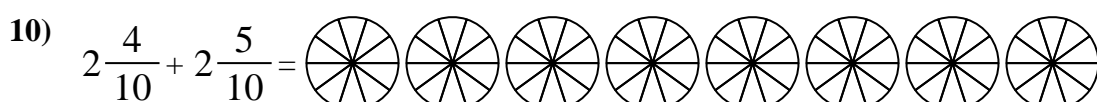
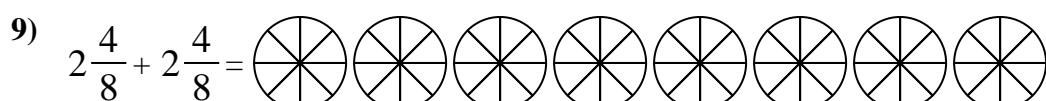
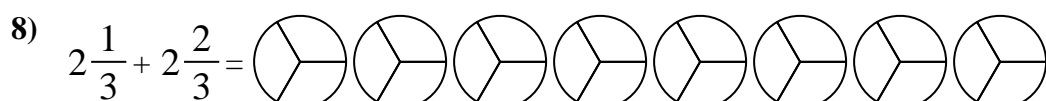
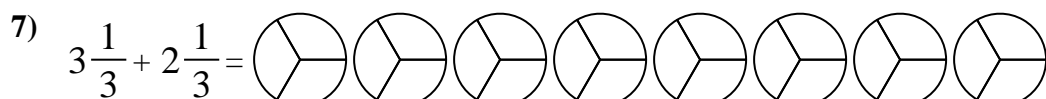

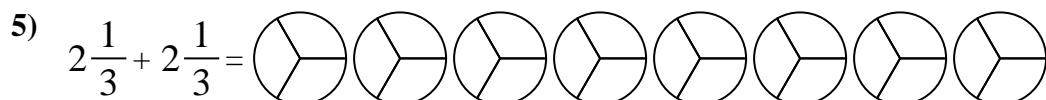
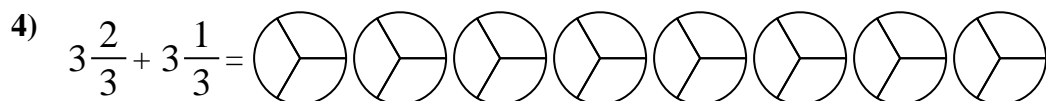
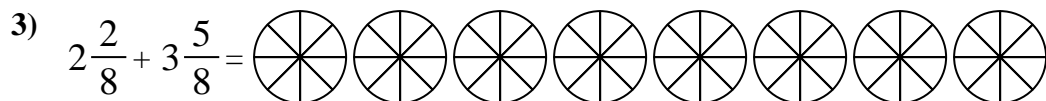
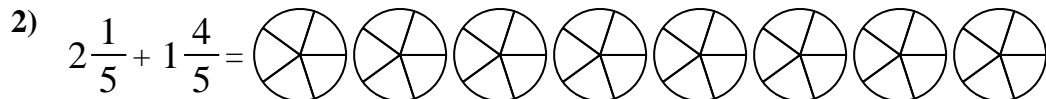
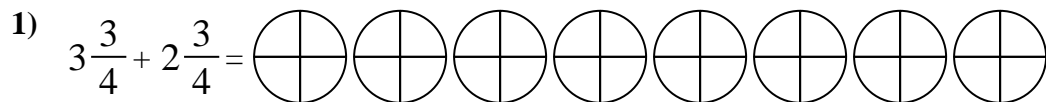
To solve a fraction addition problem one strategy is to shade in the whole amounts first (1 & 2).



Next fill in the fraction amounts ( $\frac{3}{5}$  &  $\frac{4}{5}$ ).



When all of the pieces are filled in we can see that  $1 \frac{3}{5} + 2 \frac{4}{5} = 4 \frac{2}{5}$



**Answers**

1. \_\_\_\_\_
2. \_\_\_\_\_
3. \_\_\_\_\_
4. \_\_\_\_\_
5. \_\_\_\_\_
6. \_\_\_\_\_
7. \_\_\_\_\_
8. \_\_\_\_\_
9. \_\_\_\_\_
10. \_\_\_\_\_



Use the visual model to solve each problem.

$1\frac{3}{5} + 2\frac{4}{5} = ?$

To solve a fraction addition problem one strategy is to shade in the whole amounts first (1 & 2).

Next fill in the fraction amounts ( $\frac{3}{5}$  &  $\frac{4}{5}$ ).

When all of the pieces are filled in we can see that  $1\frac{3}{5} + 2\frac{4}{5} = 4\frac{2}{5}$

**Answers**

1)  $3\frac{3}{4} + 2\frac{3}{4} =$

2)  $2\frac{1}{5} + 1\frac{4}{5} =$

3)  $2\frac{2}{8} + 3\frac{5}{8} =$

4)  $3\frac{2}{3} + 3\frac{1}{3} =$

5)  $2\frac{1}{3} + 2\frac{1}{3} =$

6)  $2\frac{1}{5} + 3\frac{1}{5} =$

7)  $3\frac{1}{3} + 2\frac{1}{3} =$

8)  $2\frac{1}{3} + 2\frac{2}{3} =$

9)  $2\frac{4}{8} + 2\frac{4}{8} =$

10)  $2\frac{4}{10} + 2\frac{5}{10} =$

1.           $6\frac{2}{4}$
2.           $4\frac{0}{5}$
3.           $5\frac{7}{8}$
4.           $7\frac{0}{3}$
5.           $4\frac{2}{3}$
6.           $5\frac{2}{5}$
7.           $5\frac{2}{3}$
8.           $5\frac{0}{3}$
9.           $5\frac{0}{8}$
10.           $4\frac{9}{10}$