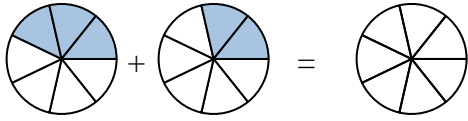




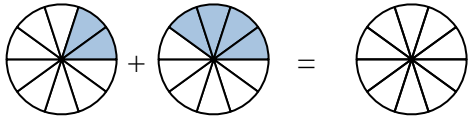
Shade in the fraction to solve the problem.

Ex)



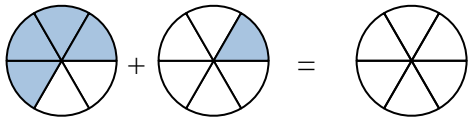
Ex.  $\frac{3}{7}$     $\frac{2}{7}$     $\frac{5}{7}$

1)



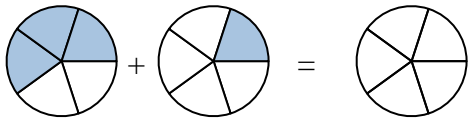
1. \_\_\_\_\_

2)



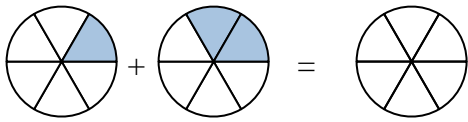
2. \_\_\_\_\_

3)



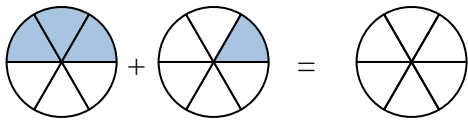
3. \_\_\_\_\_

4)



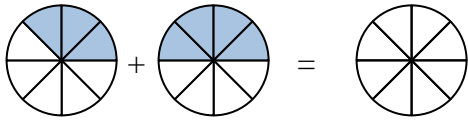
4. \_\_\_\_\_

5)



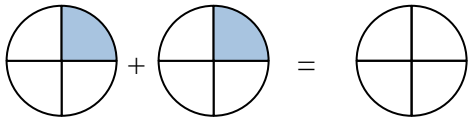
5. \_\_\_\_\_

6)



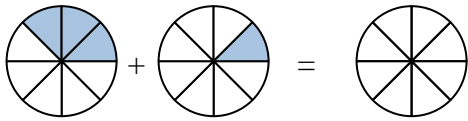
6. \_\_\_\_\_

7)



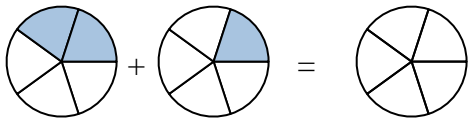
7. \_\_\_\_\_

8)



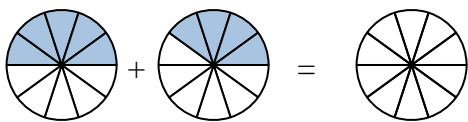
8. \_\_\_\_\_

9)



9. \_\_\_\_\_

10)



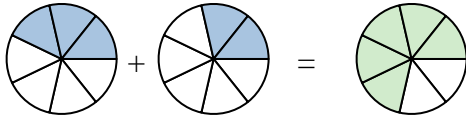
10. \_\_\_\_\_

**Answers**



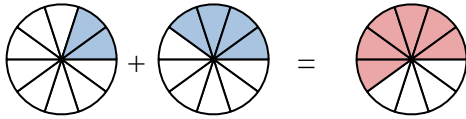
Shade in the fraction to solve the problem.

Ex)



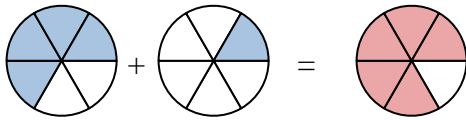
Ex.  $\frac{3}{7}$     $\frac{2}{7}$     $\frac{5}{7}$

1)



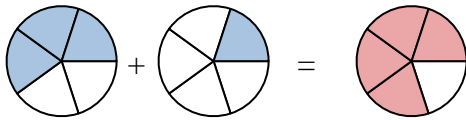
1.  $\frac{2}{10}$     $\frac{4}{10}$     $\frac{6}{10}$

2)



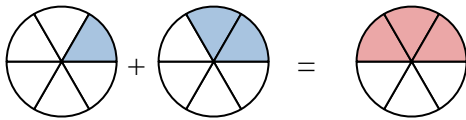
2.  $\frac{4}{6}$     $\frac{1}{6}$     $\frac{5}{6}$

3)



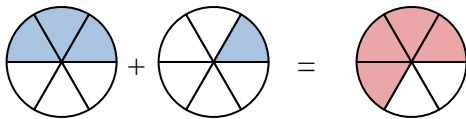
3.  $\frac{3}{5}$     $\frac{1}{5}$     $\frac{4}{5}$

4)



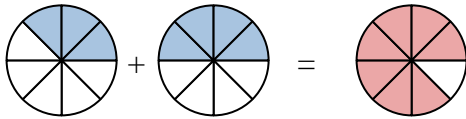
4.  $\frac{1}{6}$     $\frac{2}{6}$     $\frac{3}{6}$

5)



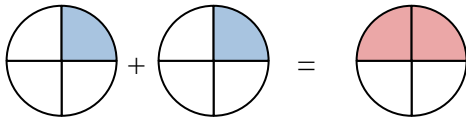
5.  $\frac{3}{6}$     $\frac{1}{6}$     $\frac{4}{6}$

6)



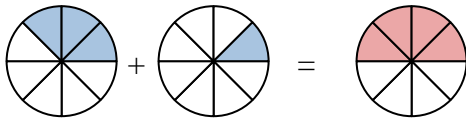
6.  $\frac{3}{8}$     $\frac{4}{8}$     $\frac{7}{8}$

7)



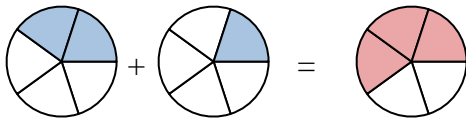
7.  $\frac{1}{4}$     $\frac{1}{4}$     $\frac{2}{4}$

8)



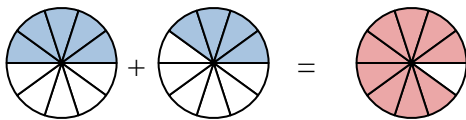
8.  $\frac{3}{8}$     $\frac{1}{8}$     $\frac{4}{8}$

9)



9.  $\frac{2}{5}$     $\frac{1}{5}$     $\frac{3}{5}$

10)



10.  $\frac{5}{10}$     $\frac{4}{10}$     $\frac{9}{10}$

**Answers**