



Determine which letter best represents the sum.

1)  $\frac{8}{10} + \frac{3}{10}$

2)  $\frac{5}{6} + \frac{3}{6}$

3)  $\frac{3}{5} + \frac{1}{5}$

4)  $\frac{3}{5} + \frac{4}{5}$

5)  $\frac{5}{6} + \frac{5}{6}$

6)  $\frac{2}{3} + \frac{1}{3}$

7)  $\frac{2}{8} + \frac{3}{8}$

8)  $\frac{3}{4} + \frac{3}{4}$

9)  $\frac{3}{12} + \frac{2}{12}$

10)  $\frac{4}{8} + \frac{2}{8}$

11)  $\frac{3}{8} + \frac{5}{8}$

12)  $\frac{9}{12} + \frac{5}{12}$

13)  $\frac{2}{3} + \frac{2}{3}$

14)  $\frac{8}{12} + \frac{4}{12}$

Answers

1. \_\_\_\_\_

2. \_\_\_\_\_

3. \_\_\_\_\_

4. \_\_\_\_\_

5. \_\_\_\_\_

6. \_\_\_\_\_

7. \_\_\_\_\_

8. \_\_\_\_\_

9. \_\_\_\_\_

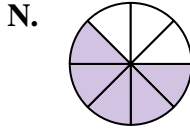
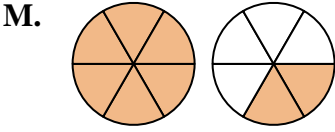
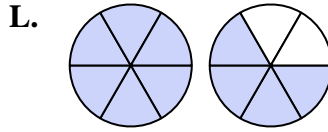
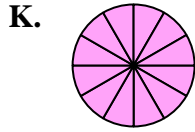
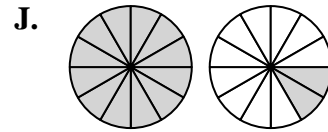
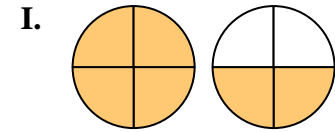
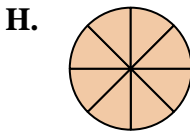
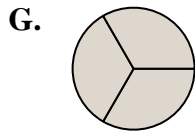
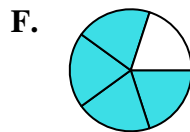
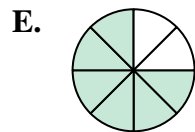
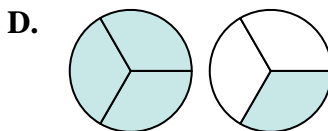
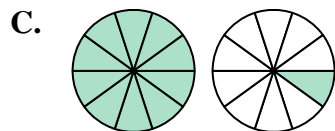
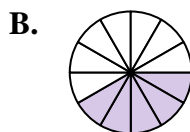
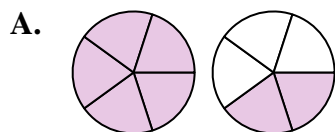
10. \_\_\_\_\_

11. \_\_\_\_\_

12. \_\_\_\_\_

13. \_\_\_\_\_

14. \_\_\_\_\_





Determine which letter best represents the sum.

1)  $\frac{8}{10} + \frac{3}{10}$

2)  $\frac{5}{6} + \frac{3}{6}$

3)  $\frac{3}{5} + \frac{1}{5}$

4)  $\frac{3}{5} + \frac{4}{5}$

5)  $\frac{5}{6} + \frac{5}{6}$

6)  $\frac{2}{3} + \frac{1}{3}$

7)  $\frac{2}{8} + \frac{3}{8}$

8)  $\frac{3}{4} + \frac{3}{4}$

9)  $\frac{3}{12} + \frac{2}{12}$

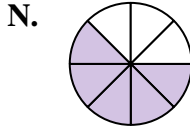
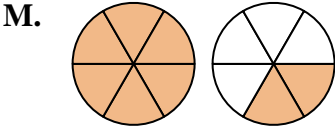
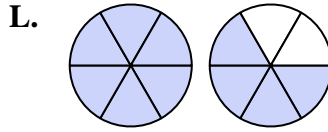
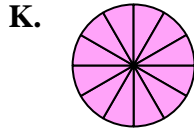
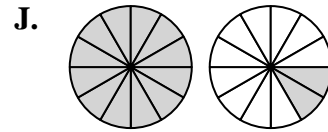
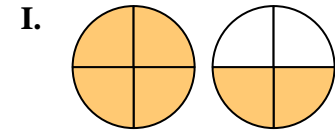
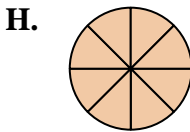
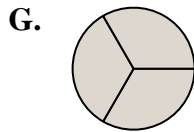
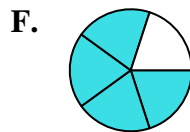
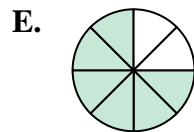
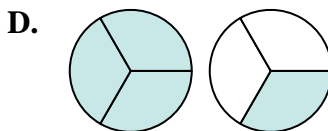
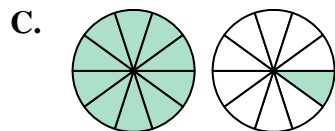
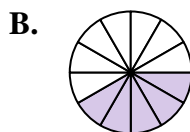
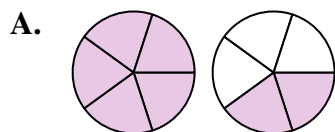
10)  $\frac{4}{8} + \frac{2}{8}$

11)  $\frac{3}{8} + \frac{5}{8}$

12)  $\frac{9}{12} + \frac{5}{12}$

13)  $\frac{2}{3} + \frac{2}{3}$

14)  $\frac{8}{12} + \frac{4}{12}$



**Answers**

1. **C**  $1\frac{1}{10}$

2. **M**  $1\frac{2}{6}$

3. **F**  $\frac{4}{5}$

4. **A**  $1\frac{2}{5}$

5. **L**  $1\frac{4}{6}$

6. **G**  $\frac{3}{3}$

7. **N**  $\frac{5}{8}$

8. **I**  $1\frac{2}{4}$

9. **B**  $\frac{5}{12}$

10. **E**  $\frac{6}{8}$

11. **H**  $\frac{8}{8}$

12. **J**  $1\frac{2}{12}$

13. **D**  $1\frac{1}{3}$

14. **K**  $1\frac{12}{12}$