



Determine which letter best represents the sum.

1)  $\frac{7}{10} + \frac{3}{10}$

3)  $\frac{2}{4} + \frac{1}{4}$

5)  $\frac{8}{12} + \frac{6}{12}$

7)  $\frac{5}{12} + \frac{3}{12}$

9)  $\frac{1}{3} + \frac{1}{3}$

11)  $\frac{3}{6} + \frac{2}{6}$

13)  $\frac{2}{5} + \frac{4}{5}$

2)  $\frac{2}{3} + \frac{1}{3}$

4)  $\frac{3}{6} + \frac{4}{6}$

6)  $\frac{7}{8} + \frac{4}{8}$

8)  $\frac{1}{12} + \frac{2}{12}$

10)  $\frac{1}{2} + \frac{1}{2}$

12)  $\frac{1}{8} + \frac{2}{8}$

14)  $\frac{5}{6} + \frac{4}{6}$

Answers

1. \_\_\_\_\_

2. \_\_\_\_\_

3. \_\_\_\_\_

4. \_\_\_\_\_

5. \_\_\_\_\_

6. \_\_\_\_\_

7. \_\_\_\_\_

8. \_\_\_\_\_

9. \_\_\_\_\_

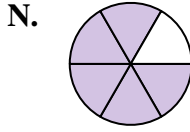
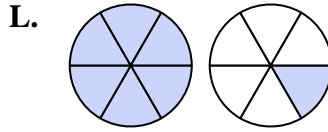
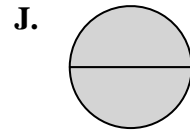
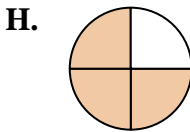
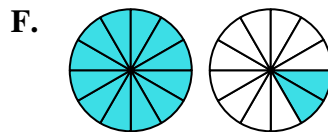
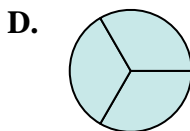
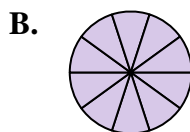
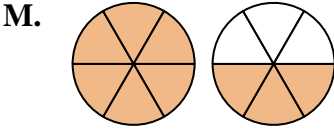
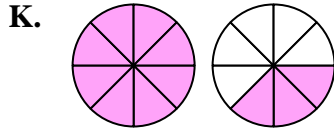
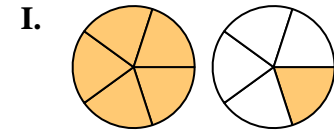
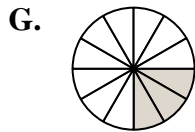
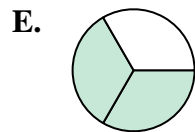
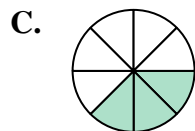
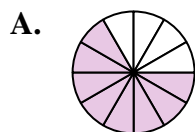
10. \_\_\_\_\_

11. \_\_\_\_\_

12. \_\_\_\_\_

13. \_\_\_\_\_

14. \_\_\_\_\_





Determine which letter best represents the sum.

1)  $\frac{7}{10} + \frac{3}{10}$

3)  $\frac{2}{4} + \frac{1}{4}$

5)  $\frac{8}{12} + \frac{6}{12}$

7)  $\frac{5}{12} + \frac{3}{12}$

9)  $\frac{1}{3} + \frac{1}{3}$

11)  $\frac{3}{6} + \frac{2}{6}$

13)  $\frac{2}{5} + \frac{4}{5}$

2)  $\frac{2}{3} + \frac{1}{3}$

4)  $\frac{3}{6} + \frac{4}{6}$

6)  $\frac{7}{8} + \frac{4}{8}$

8)  $\frac{1}{12} + \frac{2}{12}$

10)  $\frac{1}{2} + \frac{1}{2}$

12)  $\frac{1}{8} + \frac{2}{8}$

14)  $\frac{5}{6} + \frac{4}{6}$

**Answers**

1. **B**  $\frac{10}{10}$

2. **D**  $\frac{3}{3}$

3. **H**  $\frac{3}{4}$

4. **L**  $1\frac{1}{6}$

5. **F**  $1\frac{2}{12}$

6. **K**  $1\frac{3}{8}$

7. **A**  $\frac{8}{12}$

8. **G**  $\frac{3}{12}$

9. **E**  $\frac{2}{3}$

10. **J**  $\frac{2}{2}$

11. **N**  $\frac{5}{6}$

12. **C**  $\frac{3}{8}$

13. **I**  $1\frac{1}{5}$

14. **M**  $1\frac{3}{6}$

