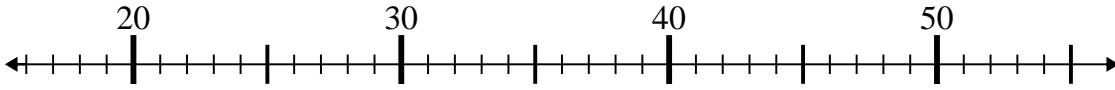




Use the numberlines to solve each problem.

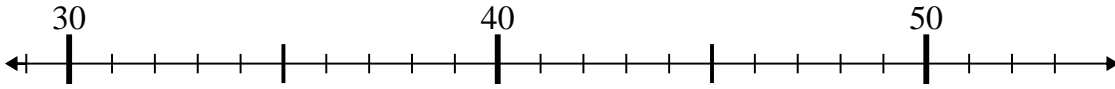
Answers

1)  $26 - 4 =$



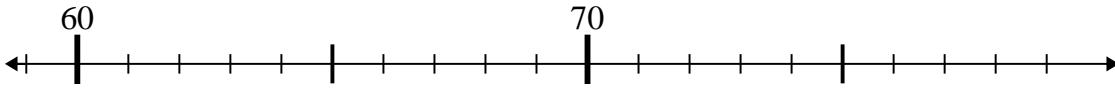
1. \_\_\_\_\_

2)  $45 - 2 =$



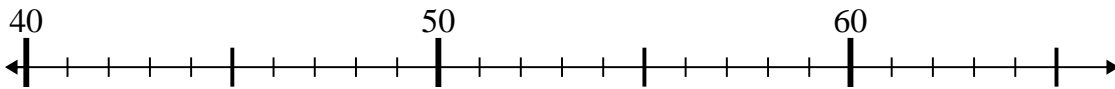
2. \_\_\_\_\_

3)  $62 + 14 =$



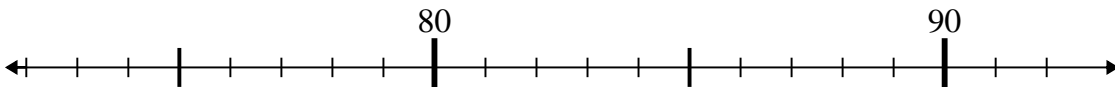
3. \_\_\_\_\_

4)  $51 - 7 =$



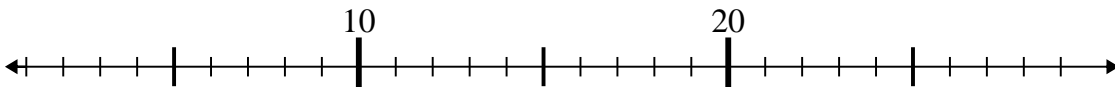
4. \_\_\_\_\_

5)  $76 + 1 =$



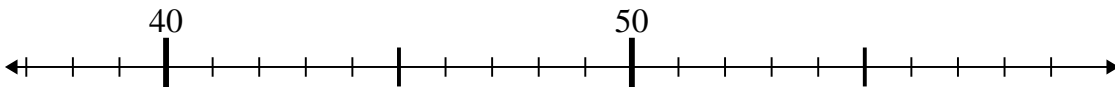
5. \_\_\_\_\_

6)  $27 - 21 =$



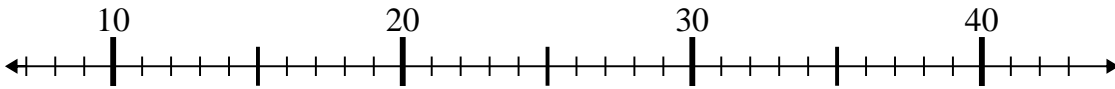
6. \_\_\_\_\_

7)  $55 - 15 =$



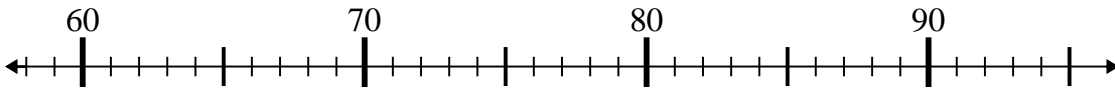
7. \_\_\_\_\_

8)  $31 - 17 =$



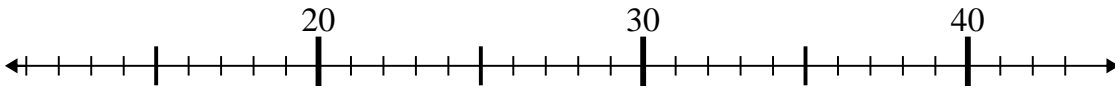
8. \_\_\_\_\_

9)  $66 + 9 =$



9. \_\_\_\_\_

10)  $27 + 15 =$

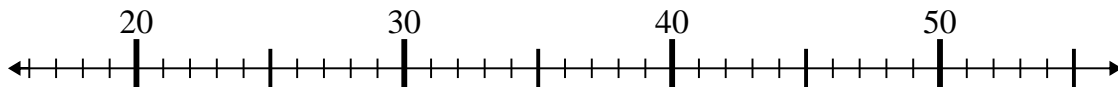


10. \_\_\_\_\_

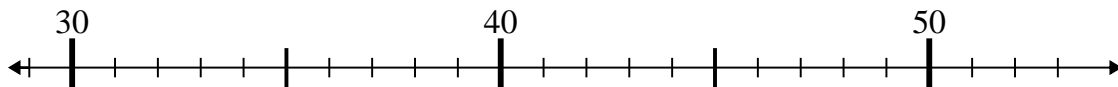


Use the numberlines to solve each problem.

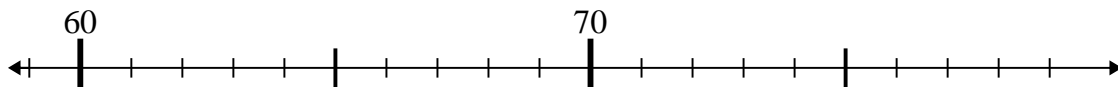
1)  $26 - 4 =$



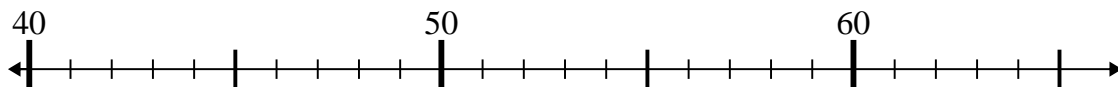
2)  $45 - 2 =$



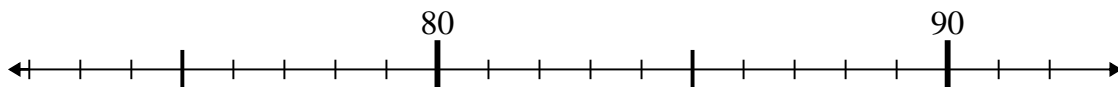
3)  $62 + 14 =$



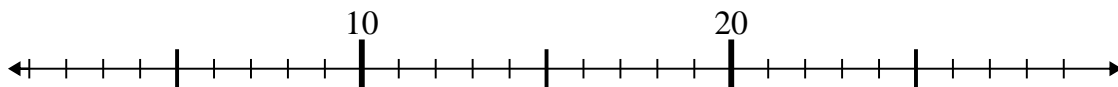
4)  $51 - 7 =$



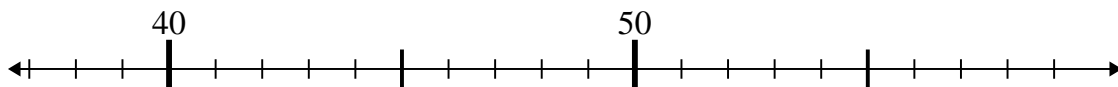
5)  $76 + 1 =$



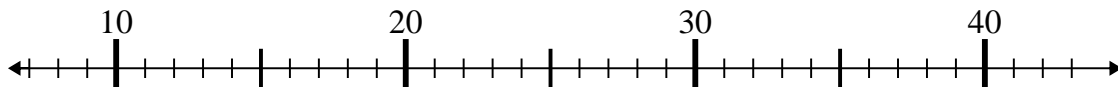
6)  $27 - 21 =$



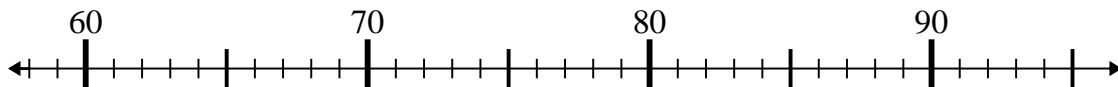
7)  $55 - 15 =$



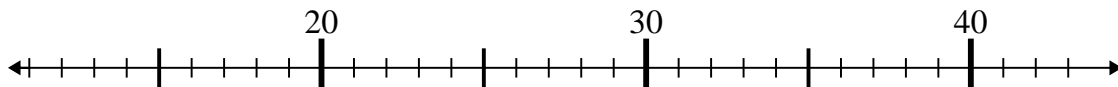
8)  $31 - 17 =$



9)  $66 + 9 =$



10)  $27 + 15 =$



Answers

1. 22

2. 43

3. 76

4. 44

5. 77

6. 6

7. 40

8. 14

9. 75

10. 42