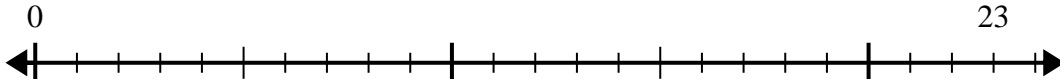


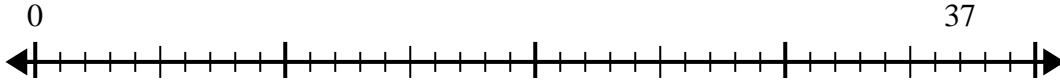


Use the number line to solve the division problem.

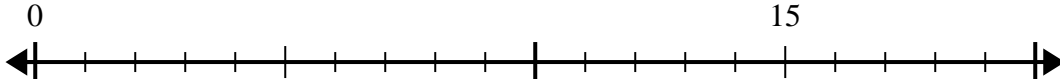
1)  $23 \div 4 =$   
0



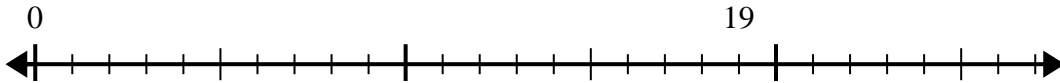
2)  $37 \div 8 =$   
0



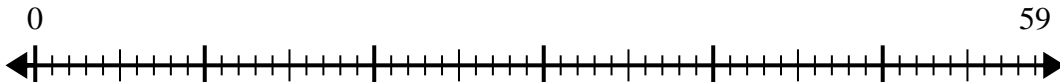
3)  $15 \div 4 =$   
0



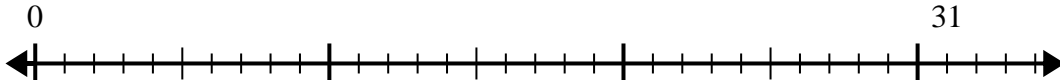
4)  $19 \div 6 =$   
0



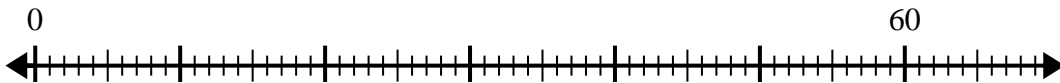
5)  $59 \div 8 =$   
0



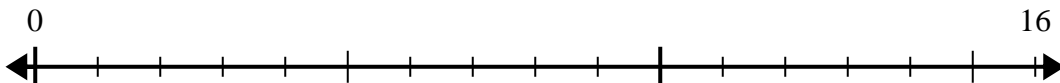
6)  $31 \div 8 =$   
0



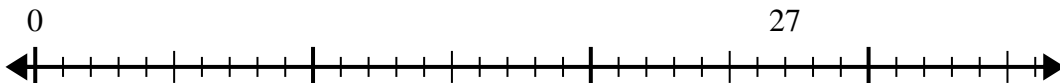
7)  $60 \div 7 =$   
0



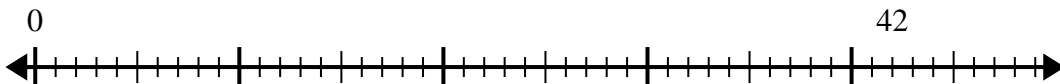
8)  $16 \div 5 =$   
0



9)  $27 \div 4 =$   
0



10)  $42 \div 5 =$   
0



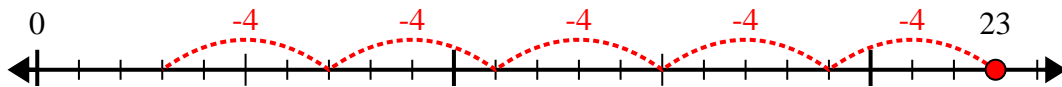
Answers

1. \_\_\_\_\_
2. \_\_\_\_\_
3. \_\_\_\_\_
4. \_\_\_\_\_
5. \_\_\_\_\_
6. \_\_\_\_\_
7. \_\_\_\_\_
8. \_\_\_\_\_
9. \_\_\_\_\_
10. \_\_\_\_\_

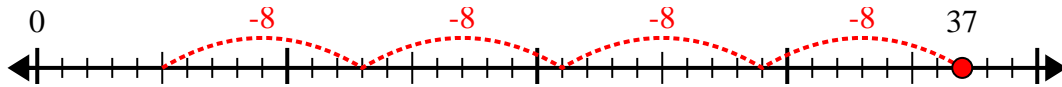


Use the number line to solve the division problem.

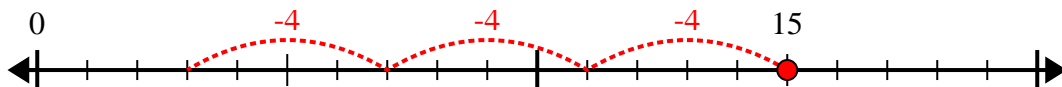
1)  $23 \div 4 =$



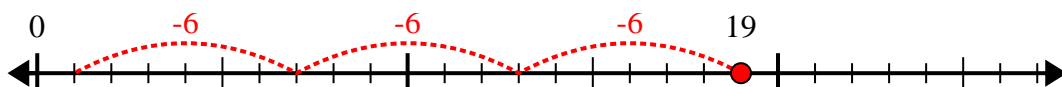
2)  $37 \div 8 =$



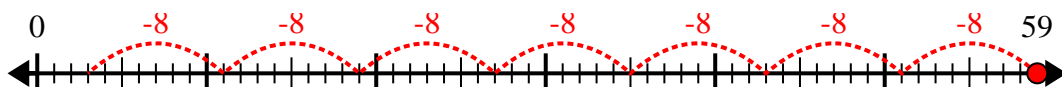
3)  $15 \div 4 =$



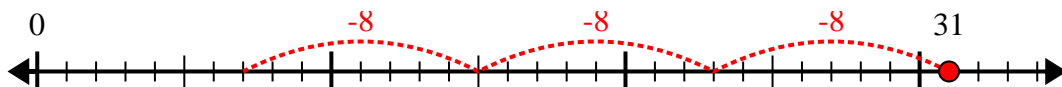
4)  $19 \div 6 =$



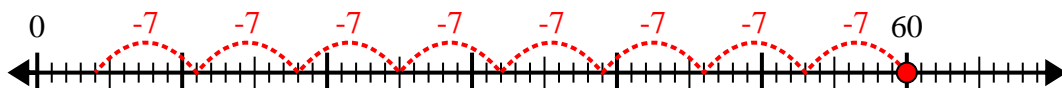
5)  $59 \div 8 =$



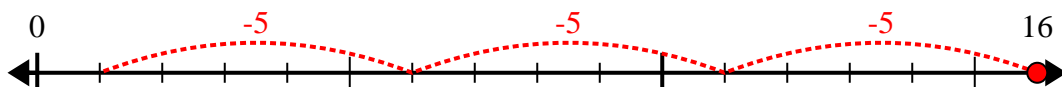
6)  $31 \div 8 =$



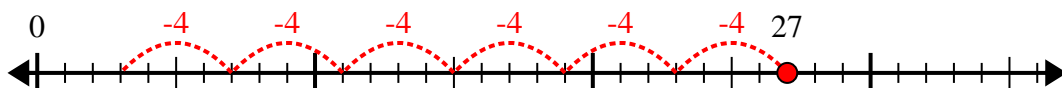
7)  $60 \div 7 =$



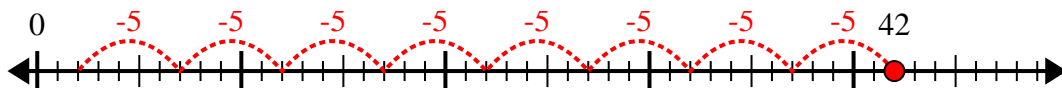
8)  $16 \div 5 =$



9)  $27 \div 4 =$



10)  $42 \div 5 =$



Answers

1. 5r3

2. 4r5

3. 3r3

4. 3r1

5. 7r3

6. 3r7

7. 8r4

8. 3r1

9. 6r3

10. 8r2