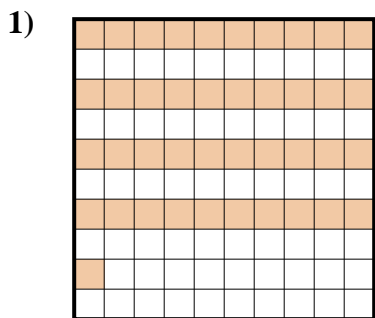


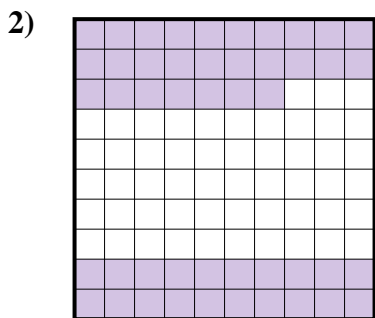


Determine which letter best represents the amount shaded of the whole.

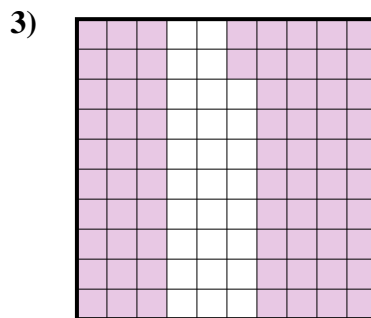
Answers



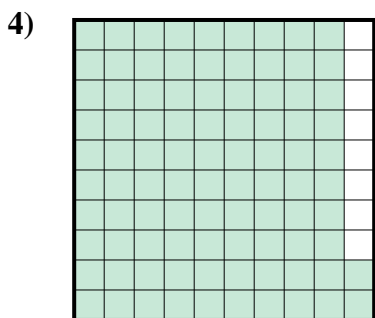
- A. 410.00
- B. 0.41
- C. 410.0
- D. 0.041




- A. 470.00
- B. 47
- C. 0.47
- D. 4.7



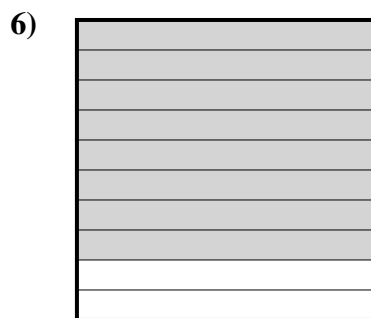
- A. 7.2
- B. 0.072
- C. 0.72
- D. 720.0



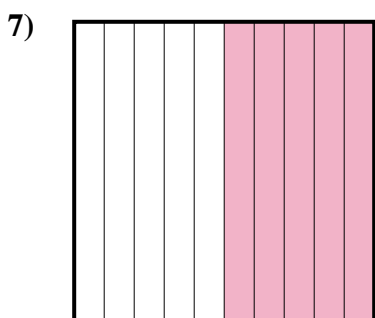
- A. 0.92
- B. 920.00
- C. 92
- D. 9.2




- A. 0.06
- B. 60
- C. 0.6
- D. 600.0



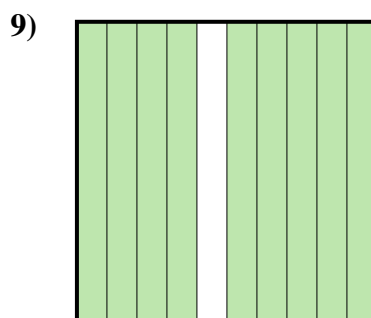
- A. 80
- B. 800.0
- C. 0.8
- D. 0.08



- A. 0.05
- B. 0.5
- C. 5
- D. 500.00



- A. 30
- B. 3
- C. 0.03
- D. 0.3



- A. 0.9
- B. 0.09
- C. 900.00
- D. 9

1. \_\_\_\_\_

2. \_\_\_\_\_

3. \_\_\_\_\_

4. \_\_\_\_\_

5. \_\_\_\_\_

6. \_\_\_\_\_

7. \_\_\_\_\_

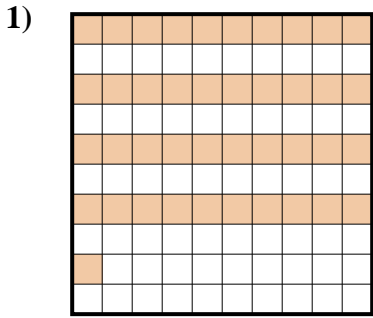
8. \_\_\_\_\_

9. \_\_\_\_\_

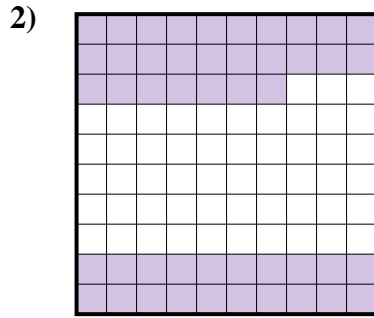


Determine which letter best represents the amount shaded of the whole.

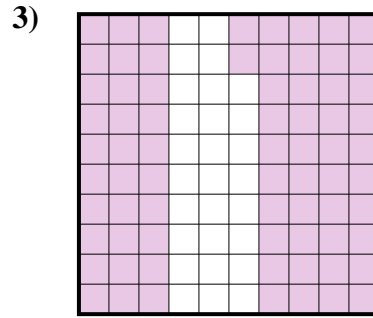
Answers



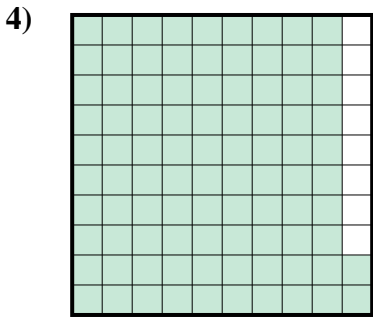
- A. 410.00
- B. 0.41
- C. 410.0
- D. 0.041



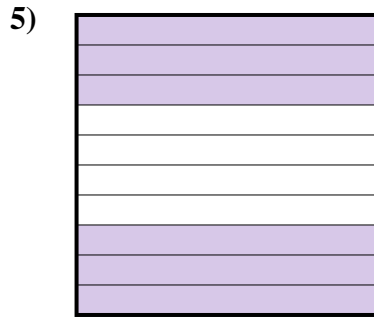
- A. 470.00
- B. 47
- C. 0.47
- D. 4.7



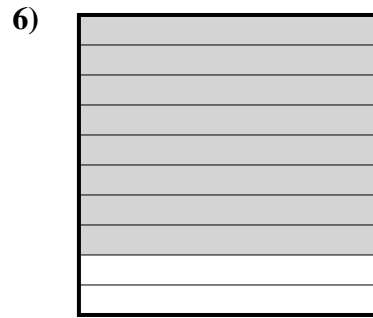
- A. 7.2
- B. 0.072
- C. 0.72
- D. 720.0



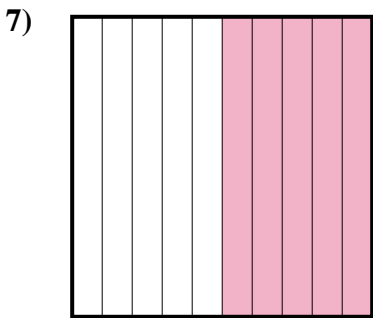
- A. 0.92
- B. 920.00
- C. 92
- D. 9.2




- A. 0.06
- B. 60
- C. 0.6
- D. 600.0



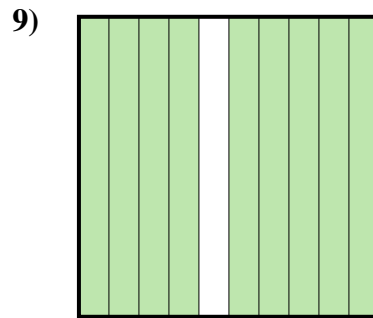
- A. 80
- B. 800.0
- C. 0.8
- D. 0.08



- A. 0.05
- B. 0.5
- C. 5
- D. 500.00



- A. 30
- B. 3
- C. 0.03
- D. 0.3



- A. 0.9
- B. 0.09
- C. 900.00
- D. 9

- 1.     **B**
- 2.     **C**
- 3.     **C**
- 4.     **A**
- 5.     **C**
- 6.     **C**
- 7.     **B**
- 8.     **D**
- 9.     **A**