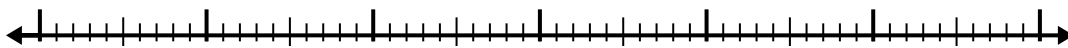


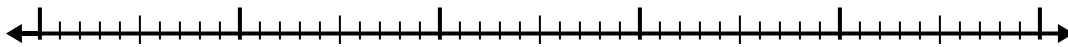


Use the number line to solve each problem.

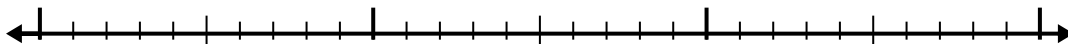
1) $11.9 - 3.1 =$




2) $11.2 - 3.4 =$




3) $9.5 - 1.3 =$



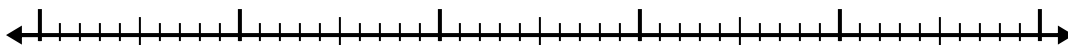
4) $5.1 - 3.4 =$




5) $9.2 - 3.3 =$



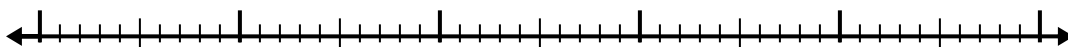
6) $6.6 - 3.6 =$



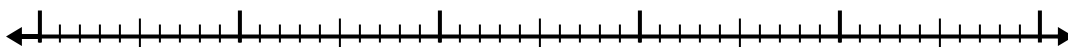
7) $5.4 - 1.8 =$



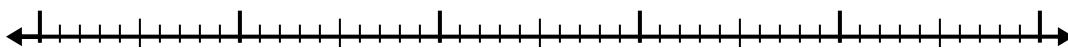
8) $11.7 - 3.8 =$



9) $5.2 - 3.4 =$



10) $4.4 - 3.3 =$



Answers

1. _____

2. _____

3. _____

4. _____

5. _____

6. _____

7. _____

8. _____

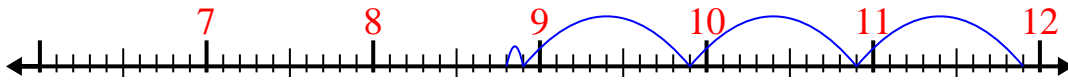
9. _____

10. _____

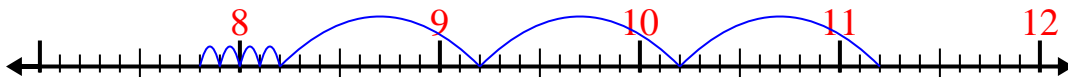


Use the number line to solve each problem.

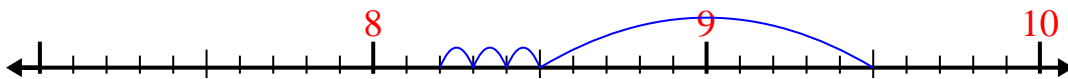
1) $11.9 - 3.1 =$



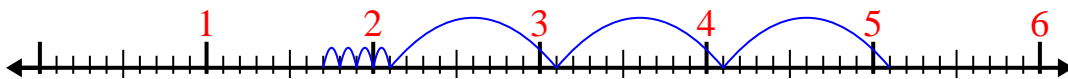
2) $11.2 - 3.4 =$



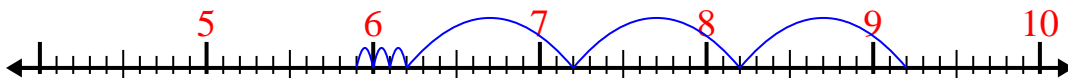
3) $9.5 - 1.3 =$



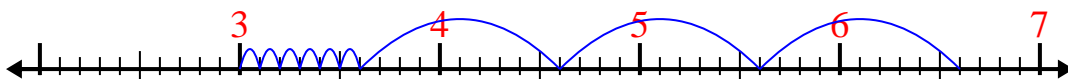
4) $5.1 - 3.4 =$



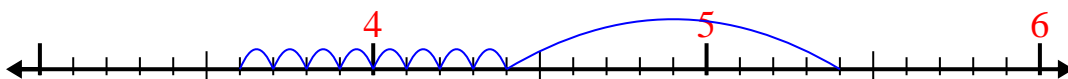
5) $9.2 - 3.3 =$



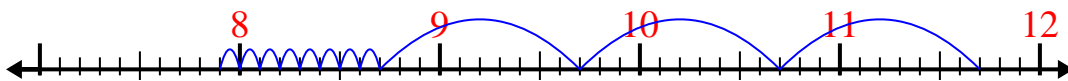
6) $6.6 - 3.6 =$



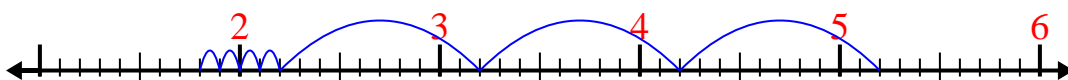
7) $5.4 - 1.8 =$



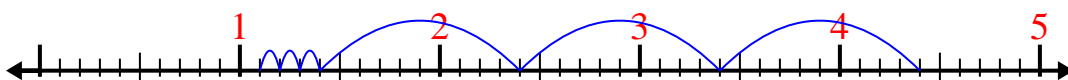
8) $11.7 - 3.8 =$



9) $5.2 - 3.4 =$



10) $4.4 - 3.3 =$

Answers1. **8.8**2. **7.8**3. **8.2**4. **1.7**5. **5.9**6. **3**7. **3.6**8. **7.9**9. **1.8**10. **1.1**