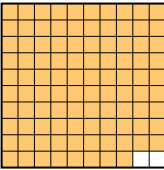
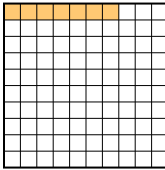

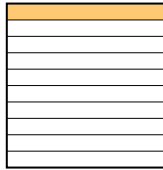




Put the boxes in order from least to greatest based on the shaded amount.



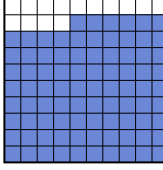
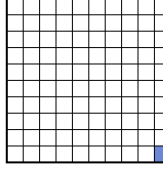
Answers

Ex) A  B  C  D 


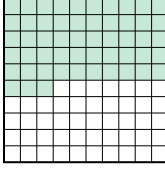

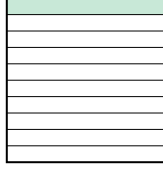
small 0.07 - B
0.1 - D
0.4 - C
large 0.98 - A

Ex. B,D,C,A


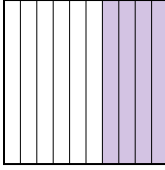
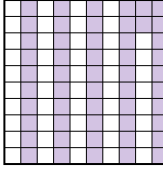
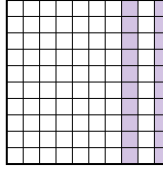
1. _____
2. _____
3. _____
4. _____
5. _____
6. _____
7. _____
8. _____

1) A  B  C  D 


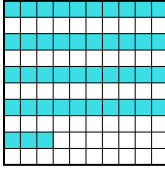


small _____
large _____

2) A  B  C  D 


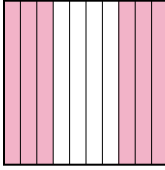
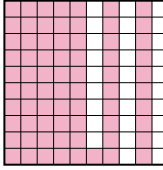
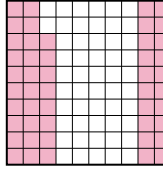
small _____
large _____

3) A  B  C  D 


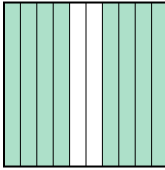


small _____
large _____

4) A  B  C  D 


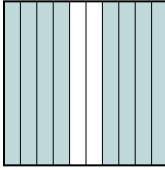

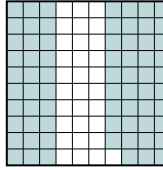
small _____
large _____

5) A  B  C  D 

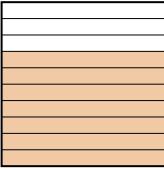
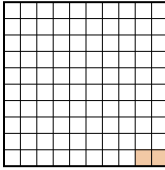
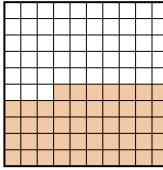
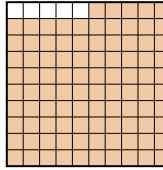
small _____
large _____

6) A  B  C  D 

small _____
large _____

7) A  B  C  D 

small _____
large _____

8) A  B  C  D 

small _____
large _____



Put the boxes in order from least to greatest based on the shaded amount.

Ex) A B C D

small $\frac{0.07}{0.1} - B$
 $\frac{0.4}{0.4} - C$
 large $\frac{0.98}{0.98} - A$

1) A B C D

small $\frac{0.01}{0.3} - D$
 $\frac{0.86}{0.86} - C$
 large $\frac{0.9}{0.9} - B$

2) A B C D

small $\frac{0.1}{0.5} - D$
 $\frac{0.53}{0.53} - B$
 large $\frac{0.8}{0.8} - C$

3) A B C D

small $\frac{0.2}{0.4} - D$
 $\frac{0.5}{0.5} - A$
 large $\frac{0.52}{0.52} - C$

4) A B C D

small $\frac{0.03}{0.2} - A$
 $\frac{0.43}{0.43} - B$
 large $\frac{0.9}{0.9} - D$

5) A B C D

small $\frac{0.1}{0.48} - A$
 $\frac{0.6}{0.6} - B$
 large $\frac{0.71}{0.71} - C$

6) A B C D

small $\frac{0.5}{0.6} - D$
 $\frac{0.8}{0.8} - B$
 large $\frac{0.83}{0.83} - A$

7) A B C D

small $\frac{0.69}{0.7} - D$
 $\frac{0.8}{0.8} - B$
 large $\frac{0.9}{0.9} - C$

8) A B C D

small $\frac{0.02}{0.47} - B$
 $\frac{0.7}{0.7} - A$
 large $\frac{0.95}{0.95} - D$

Answers

Ex. B,D,C,A

1. D,A,C,B

2. D,A,B,C

3. D,B,A,C

4. A,C,B,D

5. A,D,B,C

6. D,C,B,A

7. D,A,B,C

8. B,C,A,D