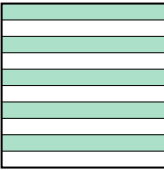
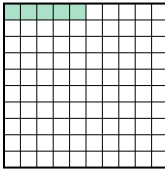
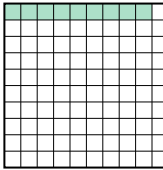





Put the boxes in order from least to greatest based on the shaded amount.


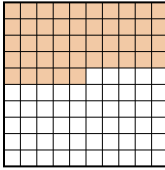
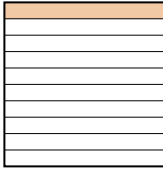
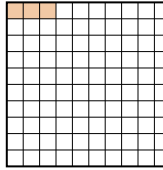
Answers

Ex) A  B  C  D 



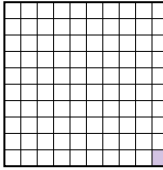
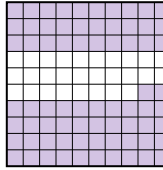
small 0.05 - B
0.09 - C
0.5 - A
large 0.6 - D

Ex. **B,C,A,D**

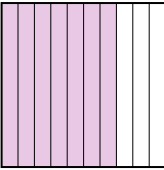
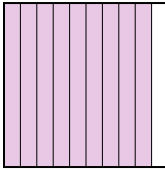

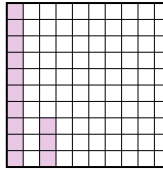
1. _____
2. _____
3. _____
4. _____
5. _____
6. _____
7. _____
8. _____

1) A  B  C  D 




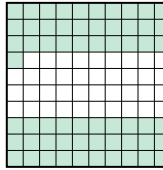
small _____
large _____

2) A  B  C  D 


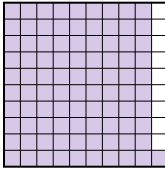
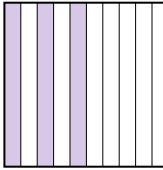
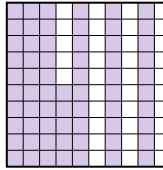
small _____
large _____

3) A  B  C  D 





small _____
large _____

4) A  B  C  D 

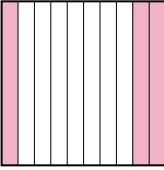
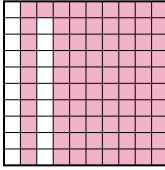
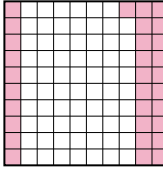
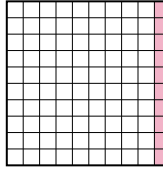
small _____
large _____

5) A  B  C  D 


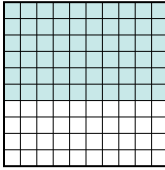

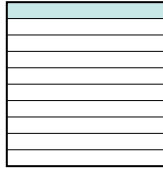
small _____
large _____

6) A  B  C  D 

small _____
large _____

7) A  B  C  D 

small _____
large _____

8) A  B  C  D 

small _____
large _____



Put the boxes in order from least to greatest based on the shaded amount.

Ex) A B C D

small $\frac{0.05 - B}{0.09 - C}$
 $\frac{0.5 - A}{0.6 - D}$

large

1) A B C D

small $\frac{0.03 - D}{0.1 - C}$
 $\frac{0.4 - A}{0.45 - B}$

large

2) A B C D

small $\frac{0.01 - C}{0.19 - A}$
 $\frac{0.72 - D}{0.8 - B}$

large

3) A B C D

small $\frac{0.13 - D}{0.7 - A}$
 $\frac{0.83 - C}{0.9 - B}$

large

4) A B C D

small $\frac{0.39 - A}{0.61 - D}$
 $\frac{0.8 - B}{0.92 - C}$

large

5) A B C D

small $\frac{0.3 - C}{0.44 - A}$
 $\frac{0.65 - D}{0.91 - B}$

large

6) A B C D

small $\frac{0.03 - D}{0.14 - B}$
 $\frac{0.3 - A}{0.7 - C}$

large

7) A B C D

small $\frac{0.1 - D}{0.3 - A}$
 $\frac{0.31 - C}{0.81 - B}$

large

8) A B C D

small $\frac{0.1 - D}{0.6 - B}$
 $\frac{0.7 - A}{0.9 - C}$

large

Answers

- Ex. B,C,A,D
1. D,C,A,B
2. C,A,D,B
3. D,A,C,B
4. A,D,B,C
5. C,A,D,B
6. D,B,A,C
7. D,A,C,B
8. D,B,A,C