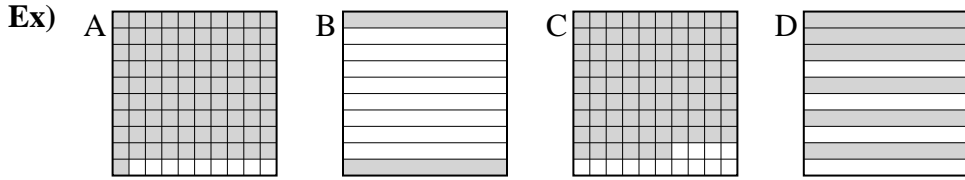




Put the boxes in order from least to greatest based on the shaded amount.

Answers



small 0.2 - B
0.6 - D
0.86 - C
 large 0.91 - A

Ex. B,D,C,A

1. _____

2. _____

3. _____

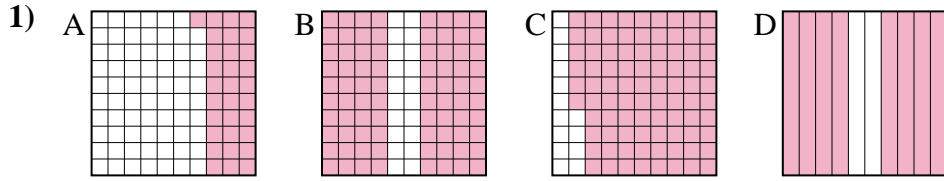
4. _____

5. _____

6. _____

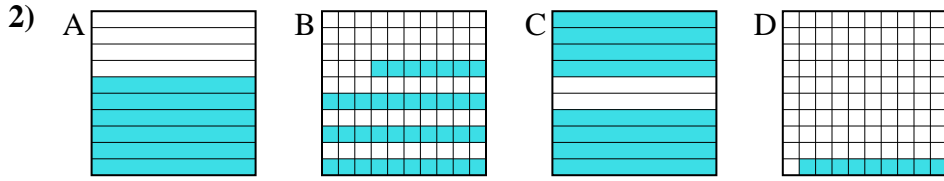
7. _____

8. _____



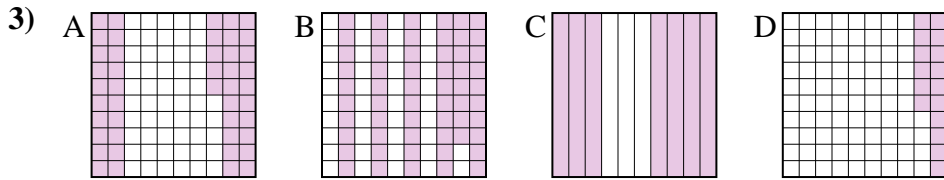
small _____

 large _____



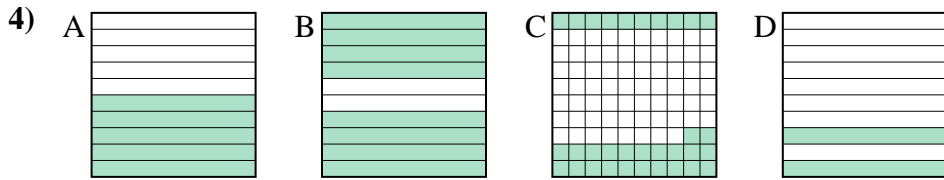
small _____

 large _____



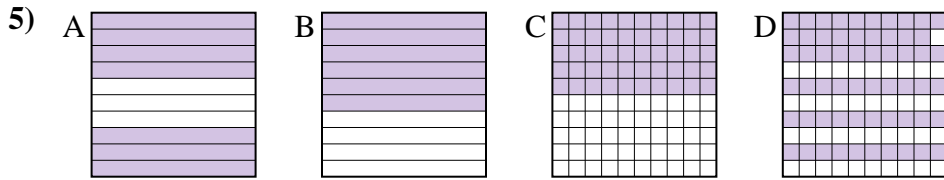
small _____

 large _____



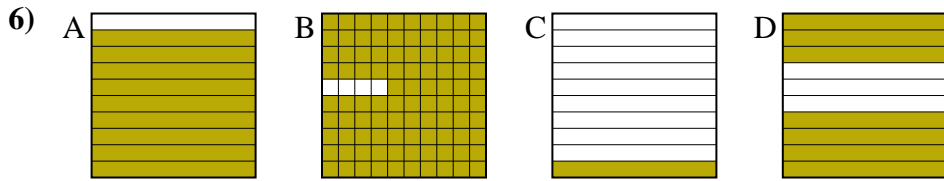
small _____

 large _____



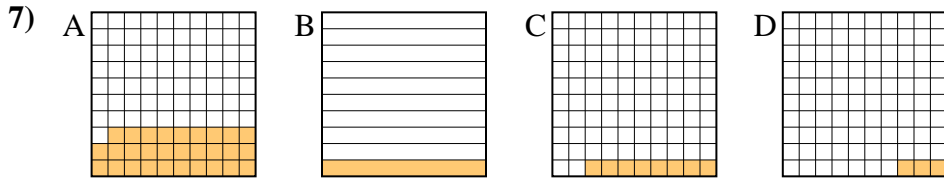
small _____

 large _____



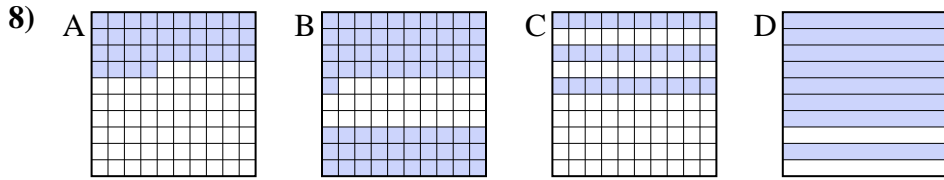
small _____

 large _____



small _____

 large _____



small _____

 large _____



Put the boxes in order from least to greatest based on the shaded amount.

Ex) A B C D

small $\frac{0.2}{0.6} - B$
 $\frac{0.86}{0.91} - C$
 large

1) A B C D

small $\frac{0.31}{0.8} - A$
 $\frac{0.8}{0.8} - B$
 large $\frac{0.86}{0.86} - C$

2) A B C D

small $\frac{0.09}{0.37} - D$
 $\frac{0.6}{0.6} - A$
 large $\frac{0.8}{0.8} - C$

3) A B C D

small $\frac{0.16}{0.45} - D$
 $\frac{0.58}{0.7} - B$
 large

4) A B C D

small $\frac{0.2}{0.32} - D$
 $\frac{0.5}{0.5} - A$
 large $\frac{0.8}{0.8} - B$

5) A B C D

small $\frac{0.5}{0.59} - C$
 $\frac{0.6}{0.6} - B$
 large $\frac{0.7}{0.7} - A$

6) A B C D

small $\frac{0.1}{0.7} - C$
 $\frac{0.9}{0.9} - A$
 large $\frac{0.96}{0.96} - B$

7) A B C D

small $\frac{0.03}{0.08} - D$
 $\frac{0.1}{0.1} - B$
 large $\frac{0.29}{0.29} - A$

8) A B C D

small $\frac{0.3}{0.34} - C$
 $\frac{0.71}{0.71} - B$
 large $\frac{0.8}{0.8} - D$

Answers

- Ex. B,D,C,A
1. A,B,B,C
2. D,B,A,C
3. D,A,B,C
4. D,C,A,B
5. C,D,B,A
6. C,D,A,B
7. D,C,B,A
8. C,A,B,D