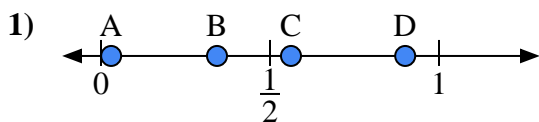


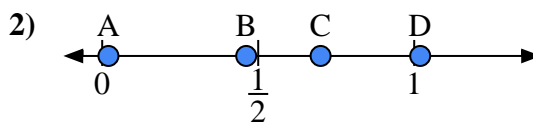


Use the number lines to answer the questions.

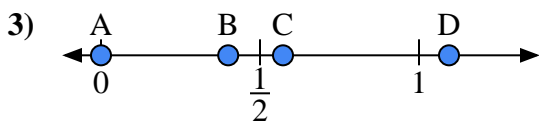
**Answers**



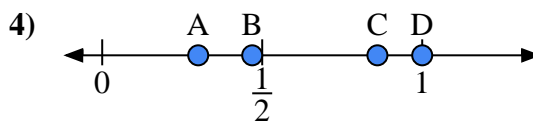
- a) Which letter best represents the location of 0.9?
- b) Which letter best represents the location of 0.03?



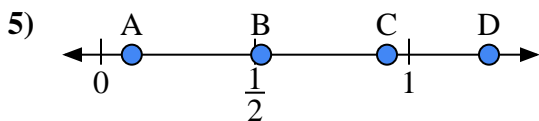
- a) Which letter best represents the location of 0.7?
- b) Which letter best represents the location of 0.02?



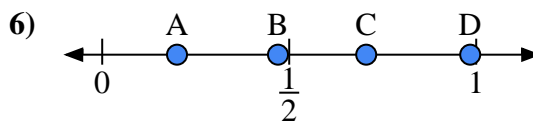
- a) Which letter best represents the location of 0.00?
- b) Which letter best represents the location of 0.40?



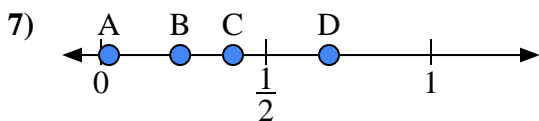
- a) Which letter best represents the location of 1.0?
- b) Which letter best represents the location of 0.86?



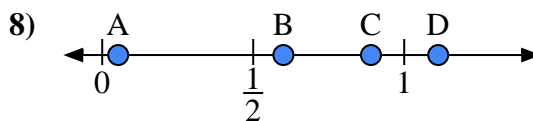
- a) Which letter best represents the location of 0.10?
- b) Which letter best represents the location of 0.52?



- a) Which letter best represents the location of 0.2?
- b) Which letter best represents the location of 0.47?



- a) Which letter best represents the location of 0.4?
- b) Which letter best represents the location of 0.24?

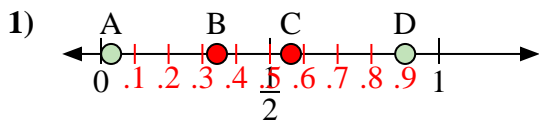


- a) Which letter best represents the location of 0.60?
- b) Which letter best represents the location of 0.89?

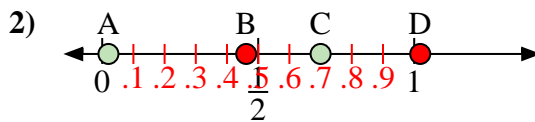
- 1. \_\_\_\_\_
- 2. \_\_\_\_\_
- 3. \_\_\_\_\_
- 4. \_\_\_\_\_
- 5. \_\_\_\_\_
- 6. \_\_\_\_\_
- 7. \_\_\_\_\_
- 8. \_\_\_\_\_



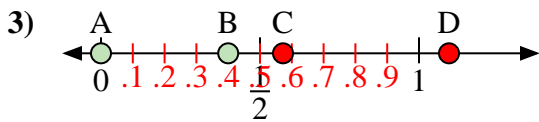
Use the number lines to answer the questions.



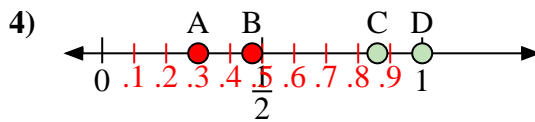
- a) Which letter best represents the location of 0.9?
- b) Which letter best represents the location of 0.03?



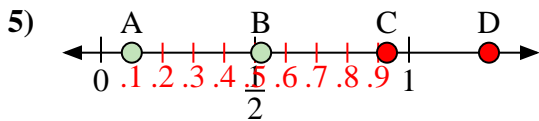
- a) Which letter best represents the location of 0.7?
- b) Which letter best represents the location of 0.02?



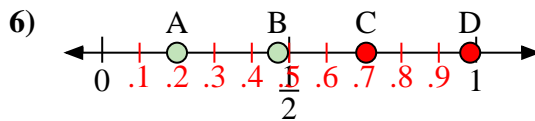
- a) Which letter best represents the location of 0.00?
- b) Which letter best represents the location of 0.40?



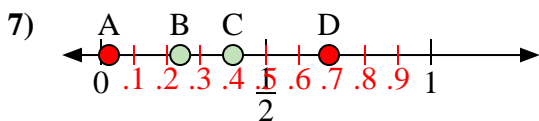
- a) Which letter best represents the location of 1.0?
- b) Which letter best represents the location of 0.86?



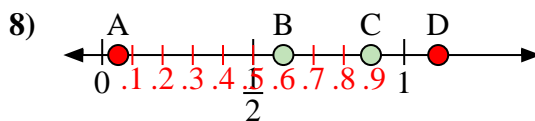
- a) Which letter best represents the location of 0.10?
- b) Which letter best represents the location of 0.52?



- a) Which letter best represents the location of 0.2?
- b) Which letter best represents the location of 0.47?



- a) Which letter best represents the location of 0.4?
- b) Which letter best represents the location of 0.24?



- a) Which letter best represents the location of 0.60?
- b) Which letter best represents the location of 0.89?

**Answers**

- 1. D A
- 2. C A
- 3. A B
- 4. D C
- 5. A B
- 6. A B
- 7. C B
- 8. B C