



Use the block on the left to find the value of the set of blocks on the right.

Answers

1) = 1

1. \_\_\_\_\_

2) = 1

2. \_\_\_\_\_

3) = 1

3. \_\_\_\_\_

4) = 1

4. \_\_\_\_\_

5) = 1

5. \_\_\_\_\_

6) = 1

6. \_\_\_\_\_

7) = 1

7. \_\_\_\_\_

8) = 1

8. \_\_\_\_\_

9) = 1


9. \_\_\_\_\_

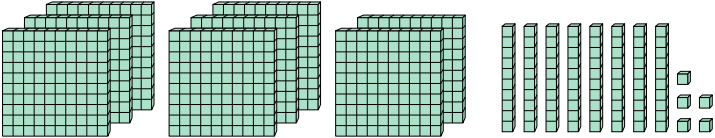
10) = 1

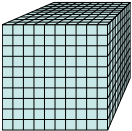
10. \_\_\_\_\_

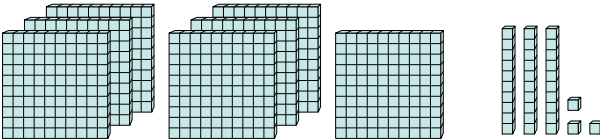


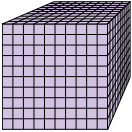
Use the block on the left to find the value of the set of blocks on the right.

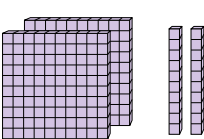
1)  = 1

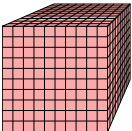


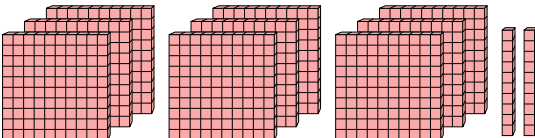
2)  = 1




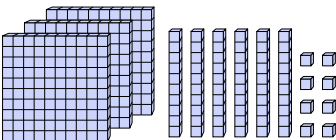
3)  = 1




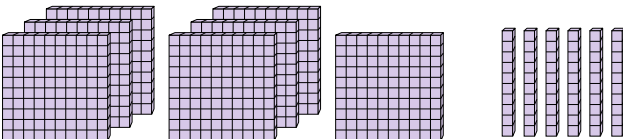
4)  = 1

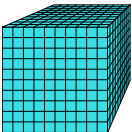


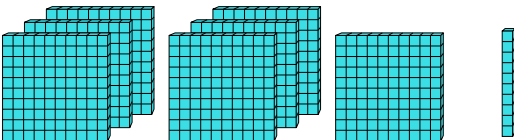
5)  = 1

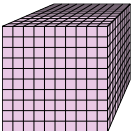


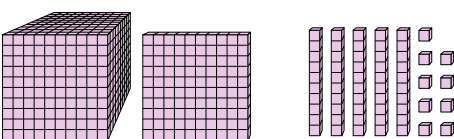
6)  = 1

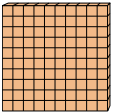


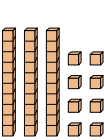
7)  = 1

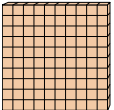


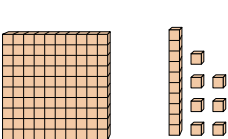
8)  = 1



9)  = 1



10)  = 1



Answers

1. 8.85

2. 0.733

3. 0.22

4. 0.92

5. 3.68

6. 7.6

7. 0.71

8. 1.159

9. 0.38

10. 1.17