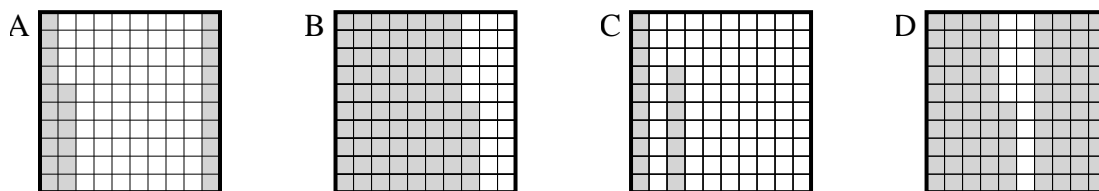




Determine which letter best answer the question.

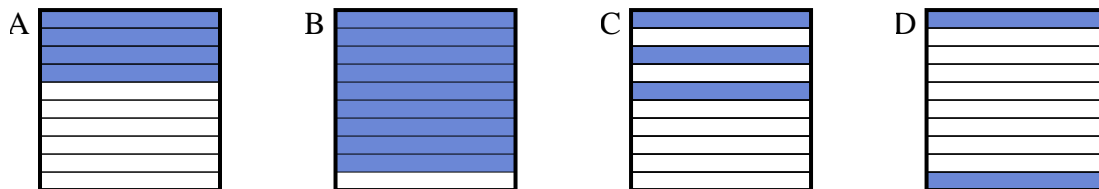
Answers

1) Which 10×10 grid is shaded to represent the decimal number that, when added to 0.74, results in a total of 1.00?



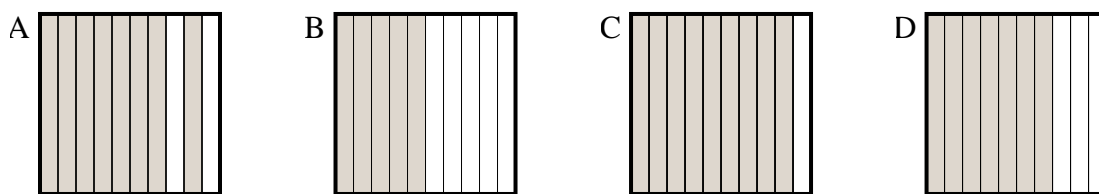
1. _____

2) Which 10×1 grid is shaded to represent the decimal number that, when added to 0.1, results in a total of 1.00?



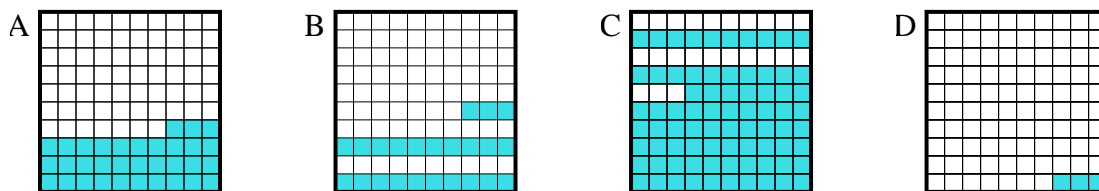
2. _____

3) Which 10×1 grid is shaded to represent the decimal number that, when added to 0.5, results in a total of 1.00?



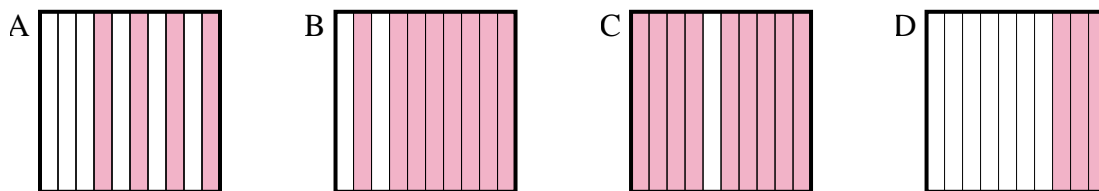
3. _____

4) Which 10×10 grid is shaded to represent the decimal number that, when added to 0.77, results in a total of 1.00?



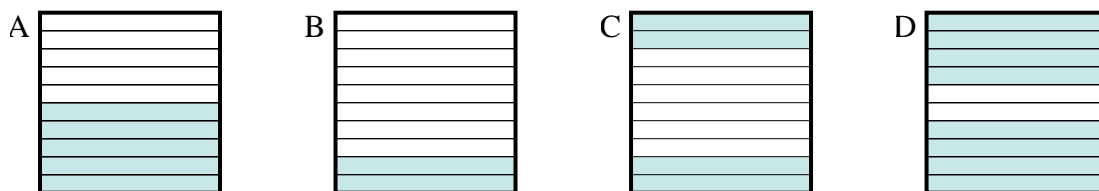
4. _____

5) Which 10×1 grid is shaded to represent the decimal number that, when added to 0.7, results in a total of 1.00?



5. _____

6) Which 10×1 grid is shaded to represent the decimal number that, when added to 0.6, results in a total of 1.00?

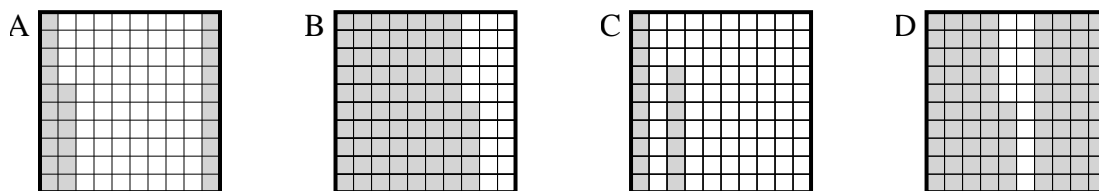


6. _____

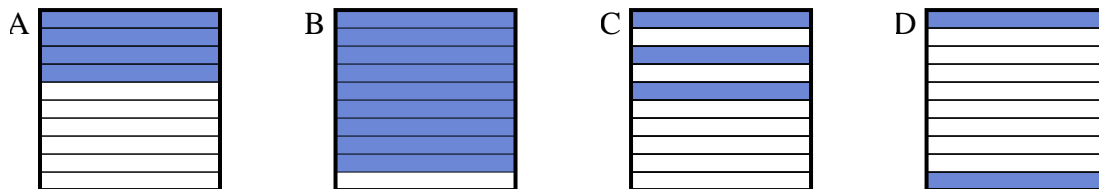


Determine which letter best answer the question.

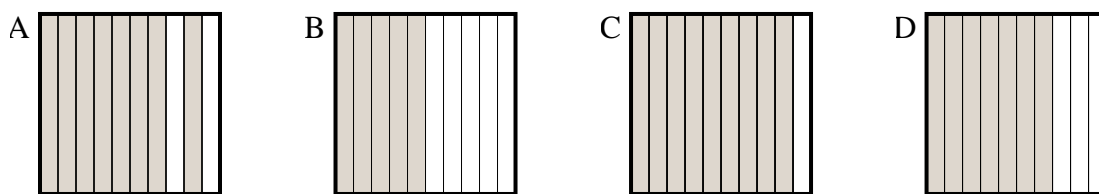
- 1) Which 10×10 grid is shaded to represent the decimal number that, when added to 0.74, results in a total of 1.00?



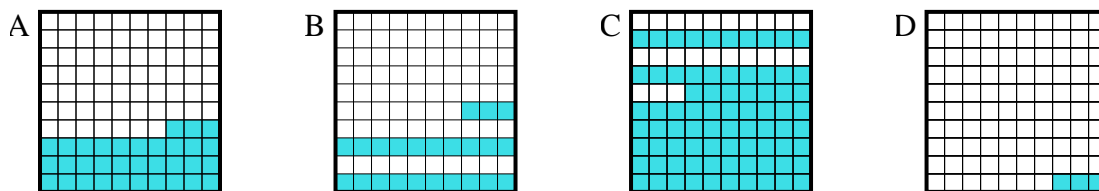
- 2) Which 10×1 grid is shaded to represent the decimal number that, when added to 0.1, results in a total of 1.00?



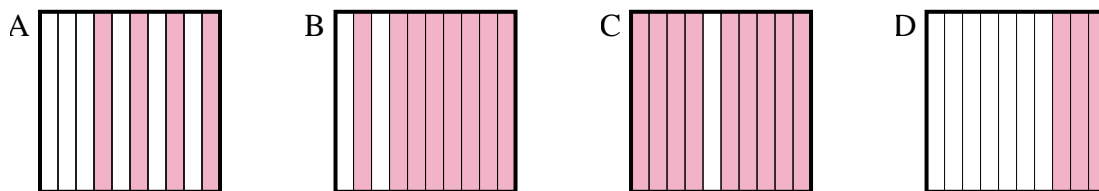
- 3) Which 10×1 grid is shaded to represent the decimal number that, when added to 0.5, results in a total of 1.00?



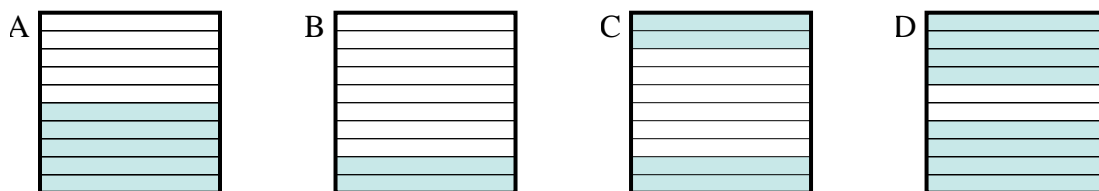
- 4) Which 10×10 grid is shaded to represent the decimal number that, when added to 0.77, results in a total of 1.00?



- 5) Which 10×1 grid is shaded to represent the decimal number that, when added to 0.7, results in a total of 1.00?



- 6) Which 10×1 grid is shaded to represent the decimal number that, when added to 0.6, results in a total of 1.00?



Answers

1. **A**
 2. **B**
 3. **B**
 4. **B**
 5. **D**
 6. **C**