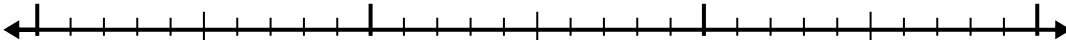




Use the number line to solve each problem.

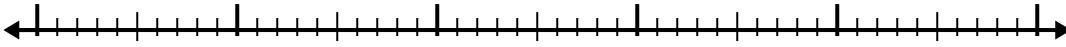
1) $4.4 + 1.5 =$



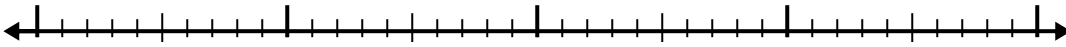
2) $3.6 + 2.8 =$



3) $2.1 + 2.6 =$



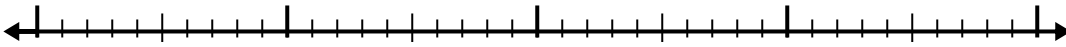
4) $7 + 1.4 =$



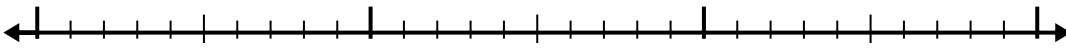
5) $4.3 + 2.3 =$



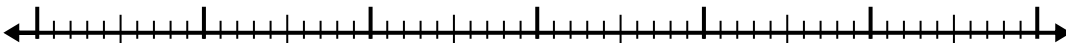
6) $5.5 + 2.2 =$



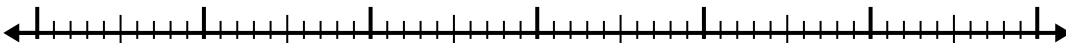
7) $1.4 + 1.6 =$



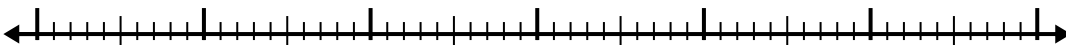
8) $5.3 + 3.5 =$



9) $3.3 + 3.5 =$



10) $1 + 3.1 =$



Answers

1. _____

2. _____

3. _____

4. _____

5. _____

6. _____

7. _____

8. _____

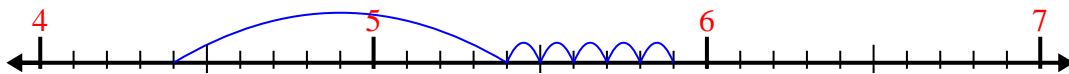
9. _____

10. _____

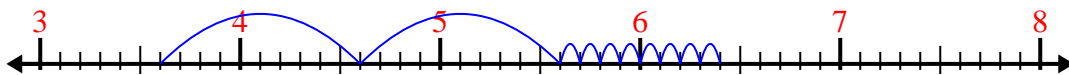


Use the number line to solve each problem.

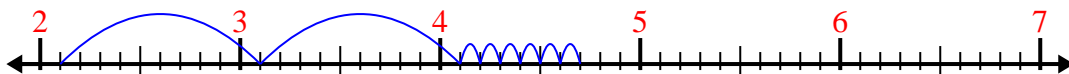
1) $4.4 + 1.5 =$



2) $3.6 + 2.8 =$



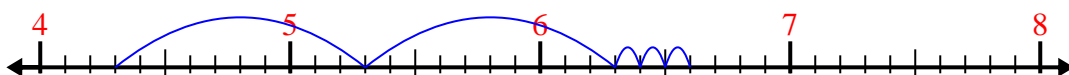
3) $2.1 + 2.6 =$



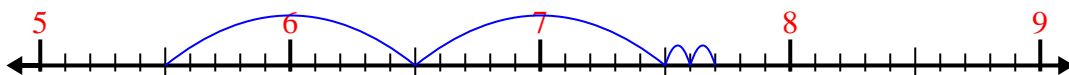
4) $7 + 1.4 =$



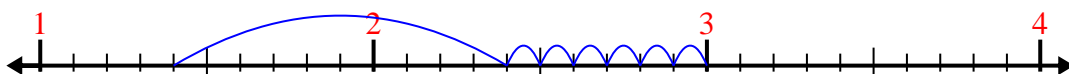
5) $4.3 + 2.3 =$



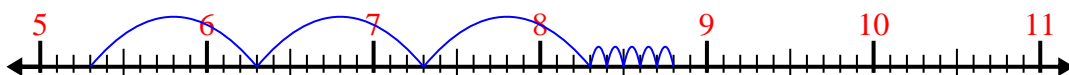
6) $5.5 + 2.2 =$



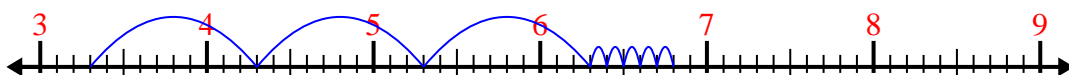
7) $1.4 + 1.6 =$



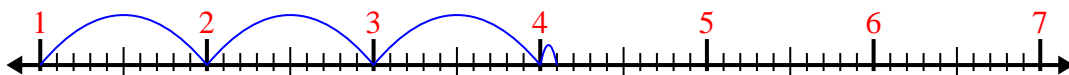
8) $5.3 + 3.5 =$



9) $3.3 + 3.5 =$



10) $1 + 3.1 =$



Answers

1. 5.9

2. 6.4

3. 4.7

4. 8.4

5. 6.6

6. 7.7

7. 3.0

8. 8.8

9. 6.8

10. 4.1