



Determine which letter best represents the volume.

Milliliter

A milliliter is equal to about 20 drops of water.



Liter

Many large soda bottles are either 1 or 2 liters.


1 Liter = 1,000 Milliliters



Answers

1. _____
2. _____
3. _____
4. _____
5. _____
6. _____
7. _____
8. _____
9. _____

1)



Liquid in a pitcher

- A. 5 liters
- B. 20 milliliters
- C. 1 liter
- D. 500 milliliters

2)



Flour in a pan of brownies

- A. 3 liters
- B. 0.5 liters
- C. 10 milliliters
- D. 16 liters


3)



Liquid in a tea cup

- A. 2 milliliters
- B. 2 liters
- C. 250 milliliters
- D. 5 liters


4)



Eyedropper holds

- A. 1000 milliliters
- B. 2 liters
- C. 500 milliliters
- D. 2 milliliters

5)



Sand a wheel barrow holds

- A. 50 milliliters
- B. 500 milliliters
- C. 3 liters
- D. 170 liters

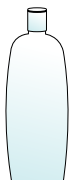
6)



Measuring Cup

- A. 1 liter
- B. 237 liters
- C. 50 milliliters
- D. 237 milliliters


7)



Shampoo in a bottle

- A. 1 milliliter
- B. 20 milliliters
- C. 1.5 liters
- D. 20 liters

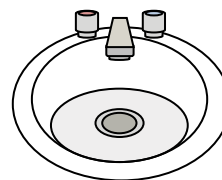
8)



Gas tank in a car

- A. 60 liters
- B. 15 milliliters
- C. 70 milliliters
- D. 3 liters

9)



Water in bathroom sink

- A. 10 milliliters
- B. 2 liters
- C. 500 milliliters
- D. 7.5 liters



Determine which letter best represents the volume.

Milliliter

A milliliter is equal to about 20 drops of water.




Liter


Many large soda bottles are either 1 or 2 liters.


1 Liter = 1,000 Milliliters





Answers


- 1) 
 Liquid in a pitcher
 A. 5 liters
 B. 20 milliliters
 C. 1 liter
 D. 500 milliliters

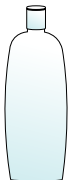
- 2) 
 Flour in a pan of brownies
 A. 3 liters
 B. 0.5 liters
 C. 10 milliliters
 D. 16 liters


- 3) 
 Liquid in a tea cup
 A. 2 milliliters
 B. 2 liters
 C. 250 milliliters
 D. 5 liters

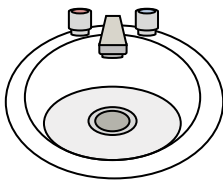
- 4) 
 Eyedropper holds
 A. 1000 milliliters
 B. 2 liters
 C. 500 milliliters
 D. 2 milliliters

- 5) 
 Sand a wheel barrow holds
 A. 50 milliliters
 B. 500 milliliters
 C. 3 liters
 D. 170 liters

- 6) 
 Measuring Cup
 A. 1 liter
 B. 237 liters
 C. 50 milliliters
 D. 237 milliliters

- 7) 
 Shampoo in a bottle
 A. 1 milliliter
 B. 20 milliliters
 C. 1.5 liters
 D. 20 liters

- 8) 
 Gas tank in a car
 A. 60 liters
 B. 15 milliliters
 C. 70 milliliters
 D. 3 liters

- 9) 
 Water in bathroom sink
 A. 10 milliliters
 B. 2 liters
 C. 500 milliliters
 D. 7.5 liters

1. **A**
 2. **B**
 3. **C**
 4. **D**
 5. **D**
 6. **D**
 7. **C**
 8. **A**
 9. **D**