


**Determine which letter best represents the volume.****Milliliter**

A milliliter is equal to about 20 drops of water.

**Liter**

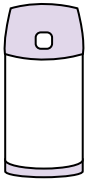
Many large soda bottles are either 1 or 2 liters.

1 Liter = 1,000 Milliliters

**Answers**

1. _____
2. _____
3. _____
4. _____
5. _____
6. _____
7. _____
8. _____
9. _____

1)



Liquid in a thermos

- A. 20 liters
- B. 3 liters
- C. 440 milliliters
- D. 20 milliliters

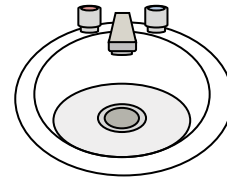
2)



Gallon of Milk

- A. 1 liter
- B. 3.75 liters
- C. 50 milliliters
- D. 750 milliliters

3)



Water in bathroom sink

- A. 500 milliliters
- B. 10 milliliters
- C. 7.5 liters
- D. 2 liters


4)



Measuring Cup

- A. 50 milliliters
- B. 237 milliliters
- C. 1 liter
- D. 237 liters

5)



Soda in a can

- A. 2 liters
- B. 350 milliliters
- C. 350 liters
- D. 2 milliliters

6)



Water for a house plant

- A. 2 milliliters
- B. 80 liters
- C. 500 milliliters
- D. 3 liters

7)



Cafeteria Milk

- A. 237 liters
- B. 1 liter
- C. 237 milliliters
- D. 2 liters

8)



Ink in a pen

- A. 2 milliliters
- B. 0.25 milliliters
- C. 1 liter
- D. 400 milliliters

9)




Liquid in a tea cup

- A. 2 milliliters
- B. 250 milliliters
- C. 2 liters
- D. 5 liters

**Determine which letter best represents the volume.****Milliliter**

A milliliter is equal to about 20 drops of water.

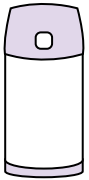
**Liter**

Many large soda bottles are either 1 or 2 liters.

1 Liter = 1,000 Milliliters

**Answers**

1)



Liquid in a thermos

- A. 20 liters
- B. 3 liters
- C. 440 milliliters
- D. 20 milliliters

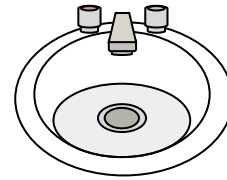
2)



Gallon of Milk

- A. 1 liter
- B. 3.75 liters
- C. 50 milliliters
- D. 750 milliliters


3)



Water in bathroom sink

- A. 500 milliliters
- B. 10 milliliters
- C. 7.5 liters
- D. 2 liters


4)



Measuring Cup

- A. 50 milliliters
- B. 237 milliliters
- C. 1 liter
- D. 237 liters

5)



Soda in a can

- A. 2 liters
- B. 350 milliliters
- C. 350 liters
- D. 2 milliliters

6)



Water for a house plant

- A. 2 milliliters
- B. 80 liters
- C. 500 milliliters
- D. 3 liters

7)



Cafeteria Milk

- A. 237 liters
- B. 1 liter
- C. 237 milliliters
- D. 2 liters

8)



Ink in a pen

- A. 2 milliliters
- B. 0.25 milliliters
- C. 1 liter
- D. 400 milliliters

9)



Liquid in a tea cup

- A. 2 milliliters
- B. 250 milliliters
- C. 2 liters
- D. 5 liters

- 1. **C**
- 2. **B**
- 3. **C**
- 4. **B**
- 5. **B**
- 6. **C**
- 7. **C**
- 8. **B**
- 9. **B**