



Determine which letter best represents the volume.

**Milliliter**

A milliliter is equal to about 20 drops of water.



**Liter**

Many large soda bottles are either 1 or 2 liters.


1 Liter = 1,000 Milliliters



**Answers**

1. \_\_\_\_\_
2. \_\_\_\_\_
3. \_\_\_\_\_
4. \_\_\_\_\_
5. \_\_\_\_\_
6. \_\_\_\_\_
7. \_\_\_\_\_
8. \_\_\_\_\_
9. \_\_\_\_\_


1)



Eyedropper holds

- A. 500 milliliters
- B. 1000 milliliters
- C. 2 liters
- D. 2 milliliters


2)



Soda in a can

- A. 2 liters
- B. 2 milliliters
- C. 350 liters
- D. 350 milliliters


3)



Water in an ice tray

- A. 2 milliliters
- B. 50 milliliters
- C. 2 liters
- D. 0.5 liters

4)



Bathtub

- A. 3 liters
- B. 500 milliliters
- C. 170 liters
- D. 5 milliliters

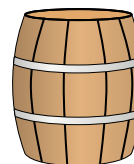
5)



Ink in a pen

- A. 0.25 milliliters
- B. 2 milliliters
- C. 400 milliliters
- D. 1 liter

6)



Water a barrel holds

- A. 200 milliliters
- B. 200 liters
- C. 5 milliliters
- D. 3 liters


7)



Measuring Cup

- A. 50 milliliters
- B. 237 milliliters
- C. 1 liter
- D. 237 liters

8)



Shampoo in a bottle

- A. 1.5 liters
- B. 1 milliliter
- C. 20 liters
- D. 20 milliliters

9)



Toothpaste in a tube

- A. 1 liter
- B. 2 liters
- C. 5 milliliters
- D. 120 milliliters



Determine which letter best represents the volume.

**Milliliter**

A milliliter is equal to about 20 drops of water.



**Liter**


Many large soda bottles are either 1 or 2 liters.

1 Liter = 1,000 Milliliters



**Answers**

1)




- Eyedropper holds
- A. 500 milliliters
  - B. 1000 milliliters
  - C. 2 liters
  - D. 2 milliliters

2)




- Soda in a can
- A. 2 liters
  - B. 2 milliliters
  - C. 350 liters
  - D. 350 milliliters

3)



- Water in an ice tray
- A. 2 milliliters
  - B. 50 milliliters
  - C. 2 liters
  - D. 0.5 liters

4)



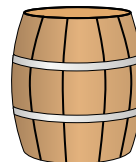
- Bathtub
- A. 3 liters
  - B. 500 milliliters
  - C. 170 liters
  - D. 5 milliliters

5)



- Ink in a pen
- A. 0.25 milliliters
  - B. 2 milliliters
  - C. 400 milliliters
  - D. 1 liter

6)




- Water a barrel holds
- A. 200 milliliters
  - B. 200 liters
  - C. 5 milliliters
  - D. 3 liters

7)



- Measuring Cup
- A. 50 milliliters
  - B. 237 milliliters
  - C. 1 liter
  - D. 237 liters

8)



- Shampoo in a bottle
- A. 1.5 liters
  - B. 1 milliliter
  - C. 20 liters
  - D. 20 milliliters

9)



- Toothpaste in a tube
- A. 1 liter
  - B. 2 liters
  - C. 5 milliliters
  - D. 120 milliliters

- 1.   **D**
- 2.   **D**
- 3.   **D**
- 4.   **C**
- 5.   **A**
- 6.   **B**
- 7.   **B**
- 8.   **A**
- 9.   **D**