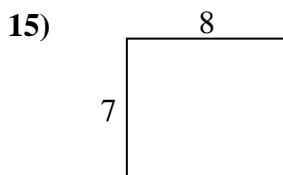
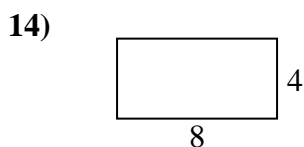
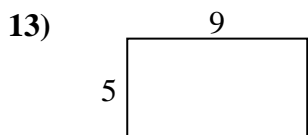
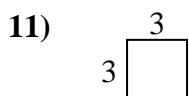
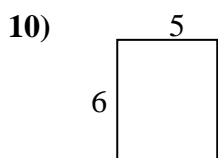
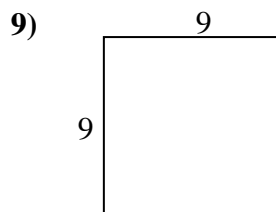
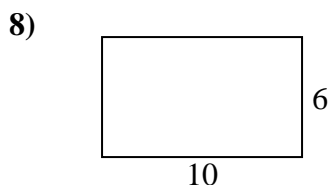
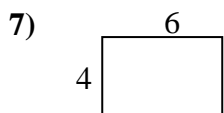
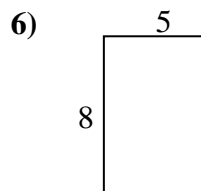
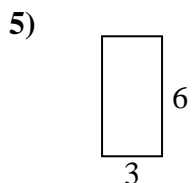
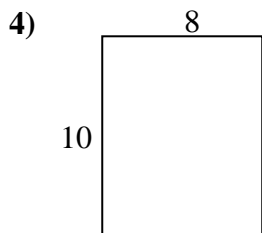
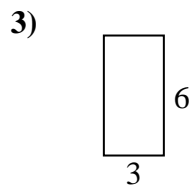
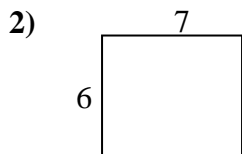
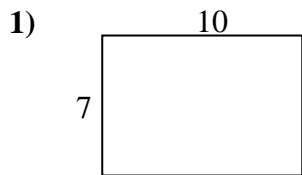




Find the perimeter and area of each figure. Each figure is in centimeters (cm). Not to scale.

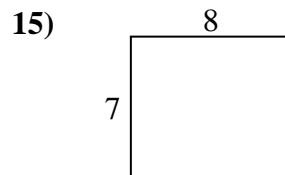
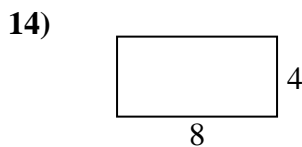
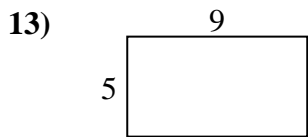
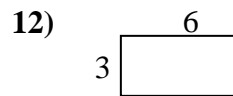
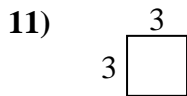
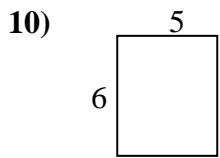
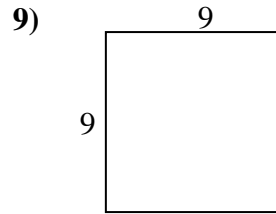
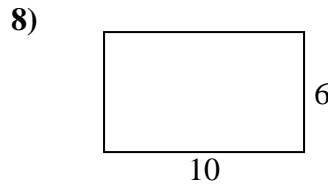
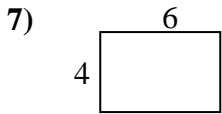
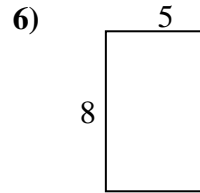
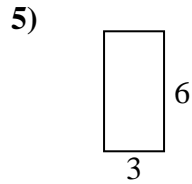
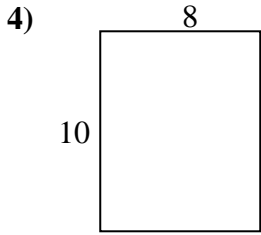
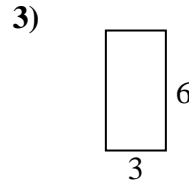
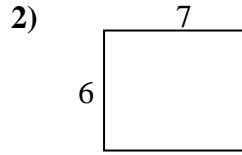
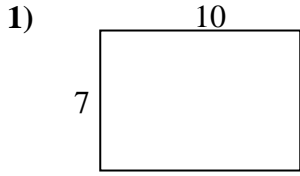


Answers

1. _____
2. _____
3. _____
4. _____
5. _____
6. _____
7. _____
8. _____
9. _____
10. _____
11. _____
12. _____
13. _____
14. _____
15. _____



Find the perimeter and area of each figure. Each figure is in centimeters (cm). Not to scale.



Answers

1.	<u>34</u>	<u>70</u>
2.	<u>26</u>	<u>42</u>
3.	<u>18</u>	<u>18</u>
4.	<u>36</u>	<u>80</u>
5.	<u>18</u>	<u>18</u>
6.	<u>26</u>	<u>40</u>
7.	<u>20</u>	<u>24</u>
8.	<u>32</u>	<u>60</u>
9.	<u>36</u>	<u>81</u>
10.	<u>22</u>	<u>30</u>
11.	<u>12</u>	<u>9</u>
12.	<u>18</u>	<u>18</u>
13.	<u>28</u>	<u>45</u>
14.	<u>24</u>	<u>32</u>
15.	<u>30</u>	<u>56</u>