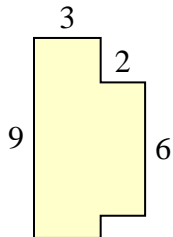




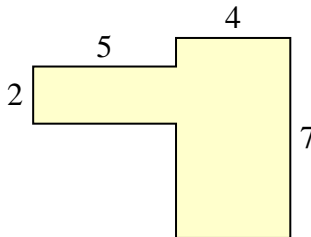
Find the total area of each shape. Measurement is in millimeters (mm). Not to scale.

Answers

1)



2)



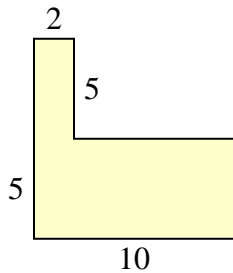
1. \_\_\_\_\_

2. \_\_\_\_\_

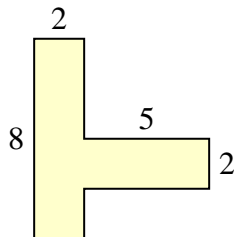
3. \_\_\_\_\_

4. \_\_\_\_\_

3)



4)



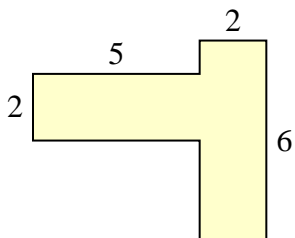
5. \_\_\_\_\_

6. \_\_\_\_\_

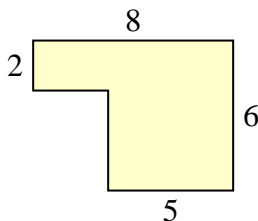
7. \_\_\_\_\_

8. \_\_\_\_\_

5)



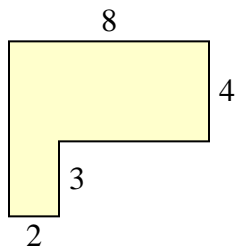
6)



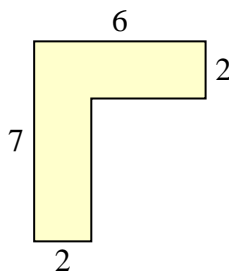
9. \_\_\_\_\_

10. \_\_\_\_\_

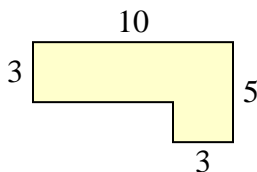
7)



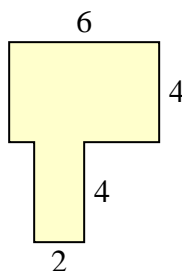
8)



9)

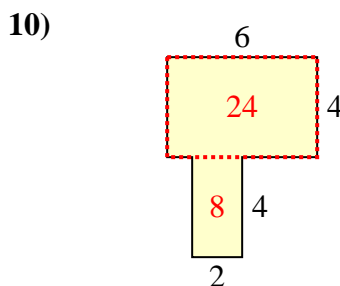
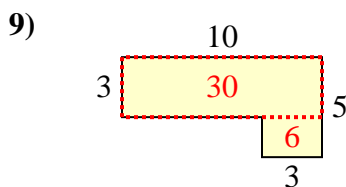
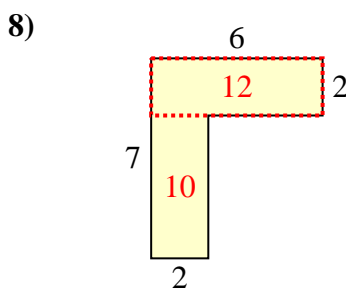
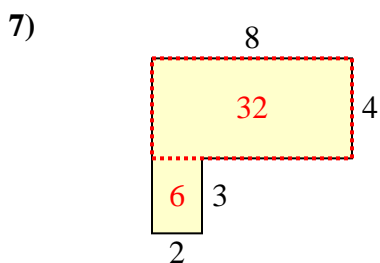
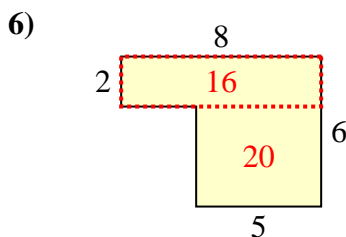
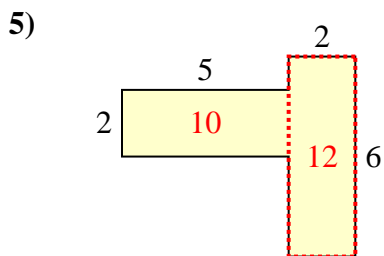
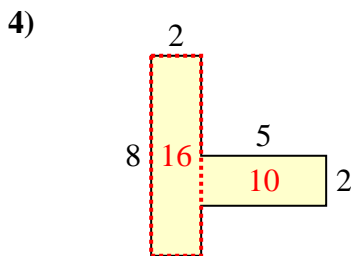
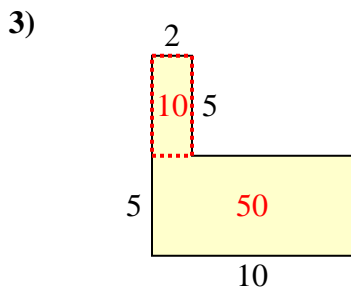
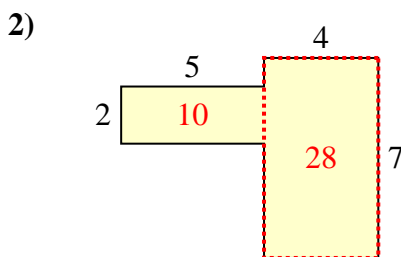
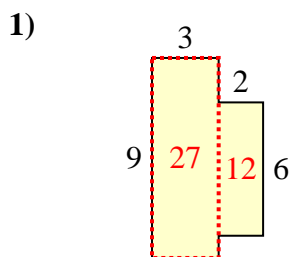


10)





Find the total area of each shape. Measurement is in millimeters (mm). Not to scale.



Answers

1. 39 mm<sup>2</sup>
2. 38 mm<sup>2</sup>
3. 60 mm<sup>2</sup>
4. 26 mm<sup>2</sup>
5. 22 mm<sup>2</sup>
6. 36 mm<sup>2</sup>
7. 38 mm<sup>2</sup>
8. 22 mm<sup>2</sup>
9. 36 mm<sup>2</sup>
10. 32 mm<sup>2</sup>