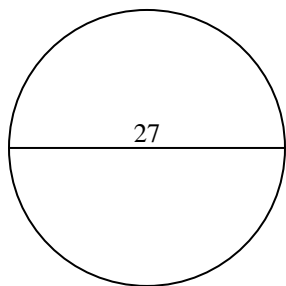




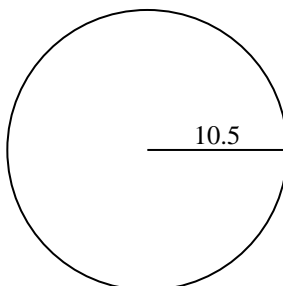
Find the area of the circle. Round to the nearest 10th.

Answers

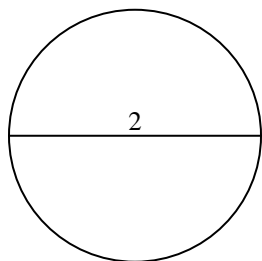
1)



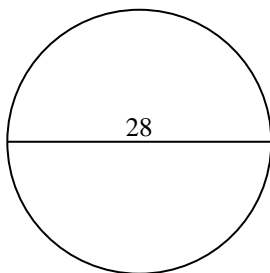
2)



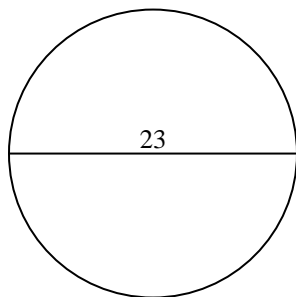
3)



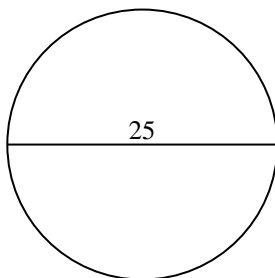
4)



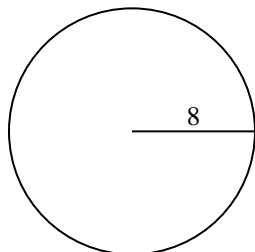
5)



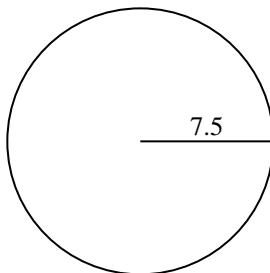
6)



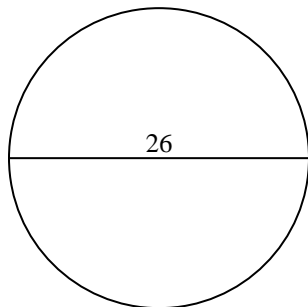
7)



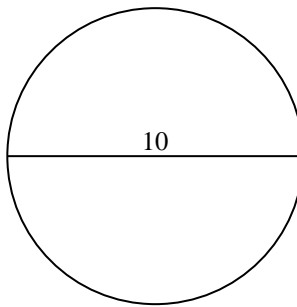
8)



9)



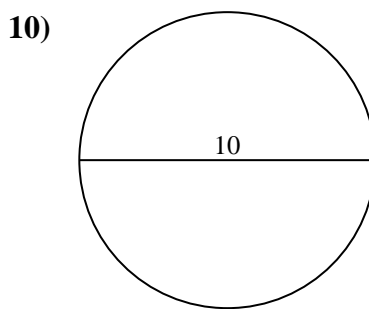
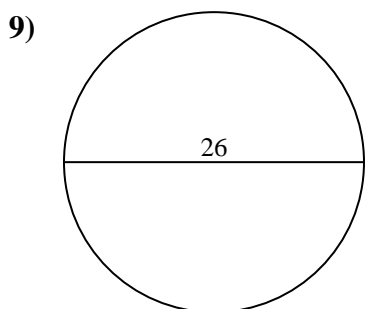
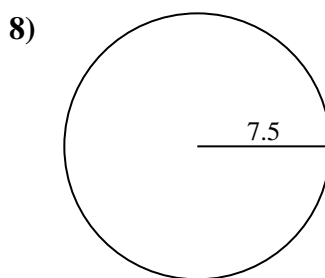
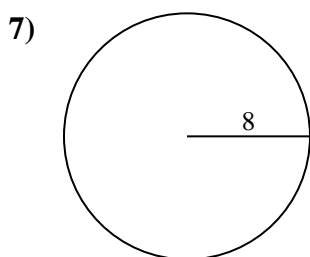
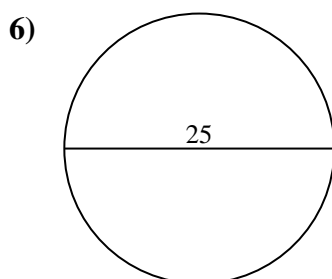
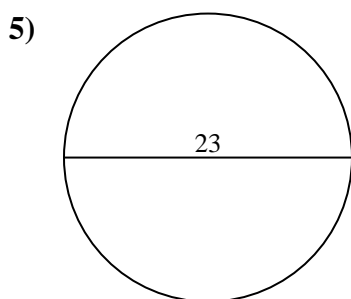
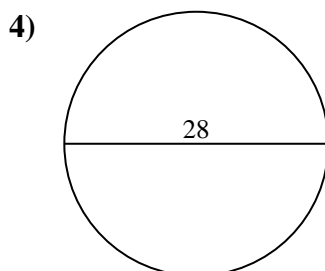
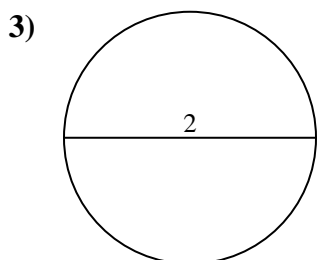
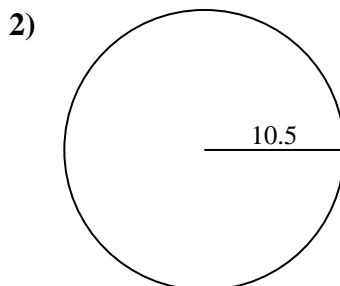
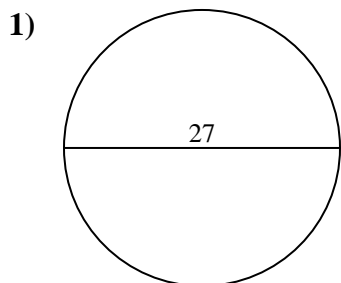
10)



- 1. _____
- 2. _____
- 3. _____
- 4. _____
- 5. _____
- 6. _____
- 7. _____
- 8. _____
- 9. _____
- 10. _____



Find the area of the circle. Round to the nearest 10th.



Answers

1. 572.6

2. 346.4

3. 3.1

4. 615.8

5. 415.5

6. 490.9

7. 201.1

8. 176.7

9. 530.9

10. 78.5



Find the area of the circle. Round to the nearest 10th.

530.9	3.1	615.8	201.1	490.9
572.6	415.5	176.7	346.4	

Answers

1. _____
2. _____
3. _____
4. _____
5. _____
6. _____
7. _____
8. _____
9. _____

