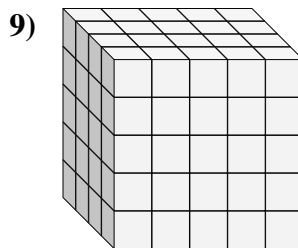
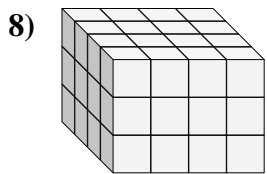
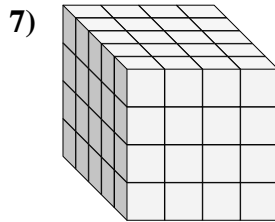
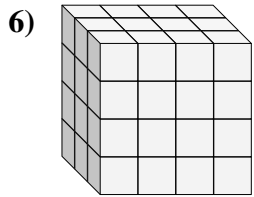
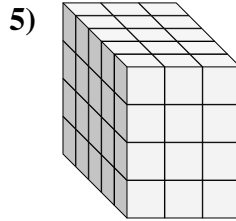
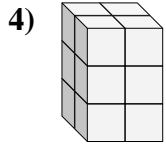
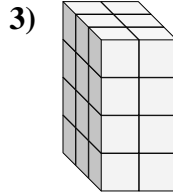
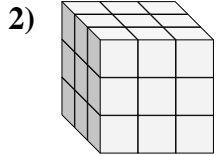
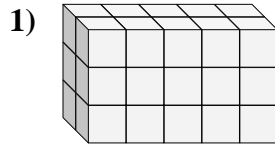
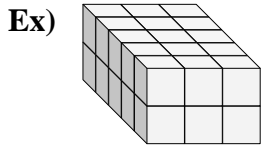




Find the length, width and height of the rectangular prism. Then find the volume.



Answers

Ex. 5 3 2 30

1. _____

2. _____

3. _____

4. _____

5. _____

6. _____

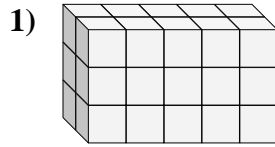
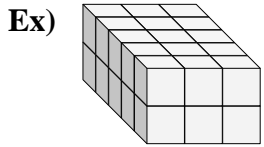
7. _____

8. _____

9. _____



Find the length, width and height of the rectangular prism. Then find the volume.



Answers
Ex. 5 3 2 30

1. 2 5 3 30

2. 3 3 3 27

3. 3 2 4 24

4. 2 2 3 12

5. 5 3 4 60

6. 3 4 4 48

7. 5 4 4 80

8. 4 4 3 48

9. 4 5 5 100

