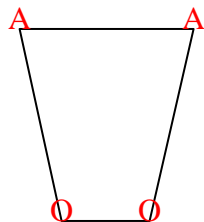




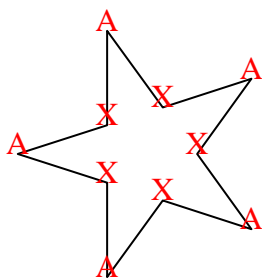


Count the number of Acute, Obtuse, Right and Reflex angles in each shape.

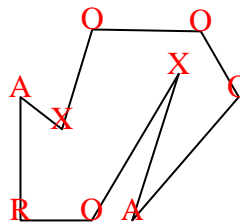
Ex)



1)



2)



Answers

Ex. 2 2 0 0

1. 5 0 0 5

2. 2 4 1 2

3. 2 1 2 2

4. 2 2 1 2

5. 0 0 4 0

6. 1 1 3 1

7. 2 2 1 1

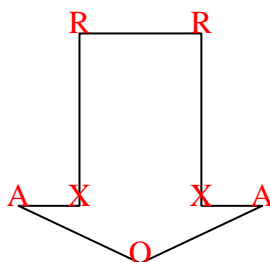
8. 2 2 0 1

9. 1 1 2 0

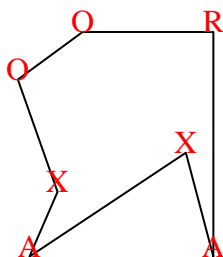
10. 2 2 0 0

11. 2 4 4 0


3)



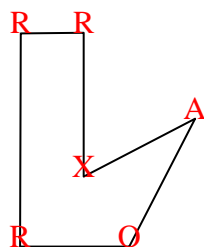
4)



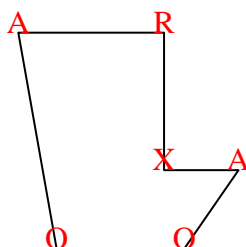
5)



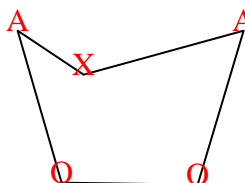
6)



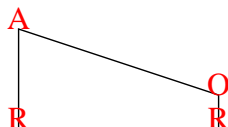
7)



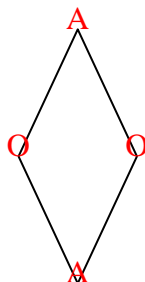
8)



9)



10)



11)

