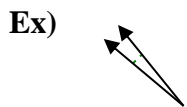


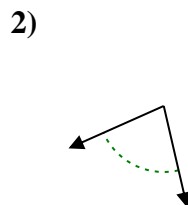
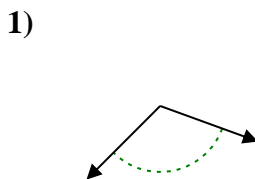


Determine if the angle shown is acute, obtuse, right or straight.

Answers

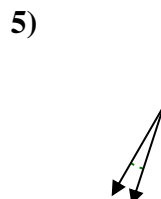
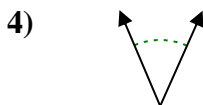
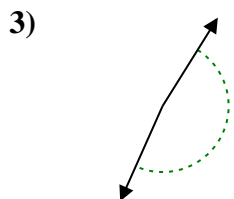


Ex. acute



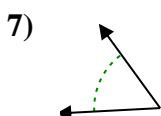
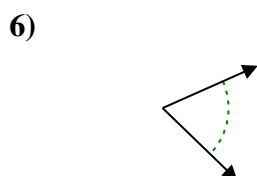
1. _____

2. _____



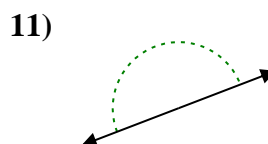
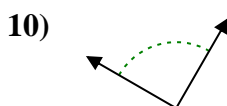
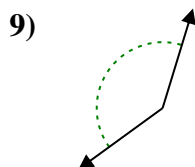
3. _____

4. _____



5. _____

6. _____

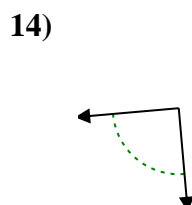
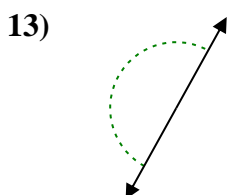
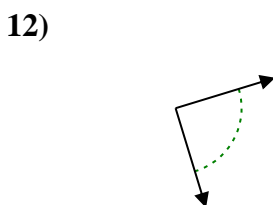


7. _____

8. _____

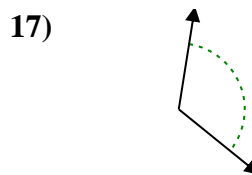
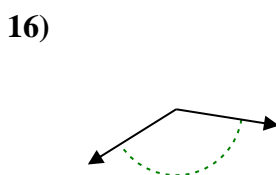
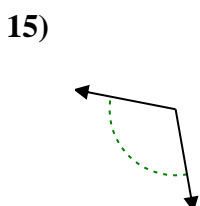
9. _____

10. _____



11. _____

12. _____

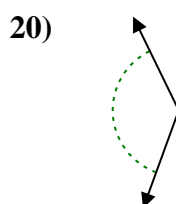
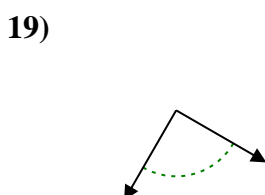
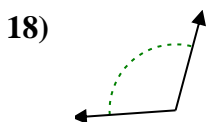


13. _____

14. _____

15. _____

16. _____



17. _____

18. _____

19. _____

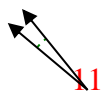
20. _____

20. _____

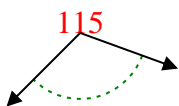


Determine if the angle shown is acute, obtuse, right or straight.

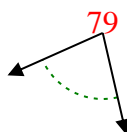
Ex)



1)



2)

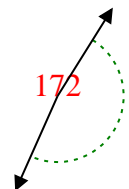


Ex. **acute**

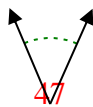
1. **obtuse**

2. **acute**

3)



4)



5)

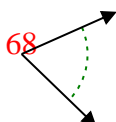


3. **obtuse**

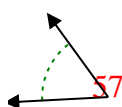
4. **acute**

5. **acute**

6)



7)



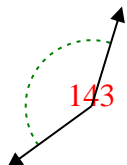
8)



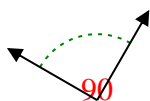
6. **acute**

7. **acute**

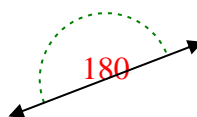
9)



10)



11)



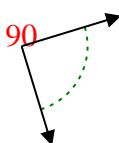
8. **acute**

9. **obtuse**

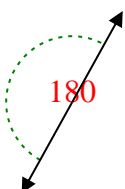
10. **right**

11. **straight**

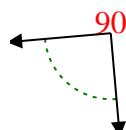
12)



13)



14)

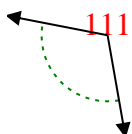


12. **right**

13. **straight**

14. **right**

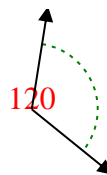
15)



16)



17)

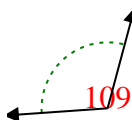


15. **obtuse**

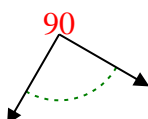
16. **obtuse**

17. **obtuse**

18)



19)



20)



18. **obtuse**

19. **right**

20. **obtuse**