



Solve each problem using a tape diagram.

Answers

- 1) Tom owned 37 video games for his Playstation and Xbox. 26 of the games were for Xbox. How many games does Tom have for playstation?
- 2) Janet had 58 pieces of candy. 11 pieces are chocolate and the rest are sugary. How many pieces of candy does Janet have that are sugary?
- 3) A store had 51 sodas on Monday. If they sold 41 of them on Tuesday, how many would they have left on Wednesday?
- 4) Frank and Isabel have 44 books. Isabel has 26. How many books does Frank have?
- 5) Emily had 76 pieces of paper in her folder. She used 29 pieces. How many pieces does she have now?
- 6) A museum had 38 paintings. If they got rid of 27 of them, how many pictures would they have left?
- 7) Amy's hair was 49 centimeters long. If she cut off 11 centimeters, how long is her hair now?

1. \_\_\_\_\_

2. \_\_\_\_\_

3. \_\_\_\_\_

4. \_\_\_\_\_

5. \_\_\_\_\_

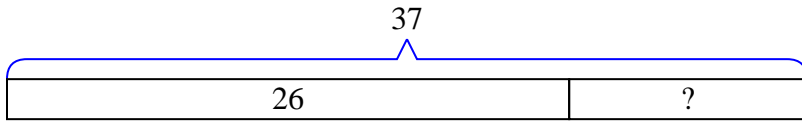
6. \_\_\_\_\_

7. \_\_\_\_\_

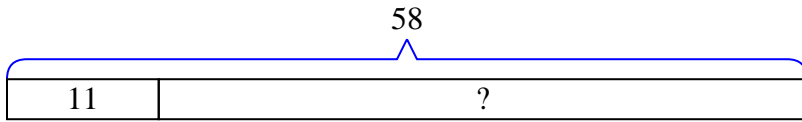


Solve each problem using a tape diagram.

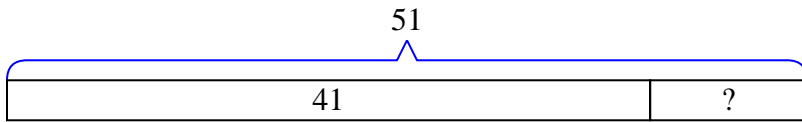
- 1) Tom owned 37 video games for his Playstation and Xbox. 26 of the games were for Xbox. How many games does Tom have for playstation?



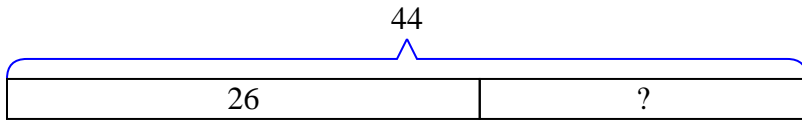
- 2) Janet had 58 pieces of candy. 11 pieces are chocolate and the rest are sugary. How many pieces of candy does Janet have that are sugary?



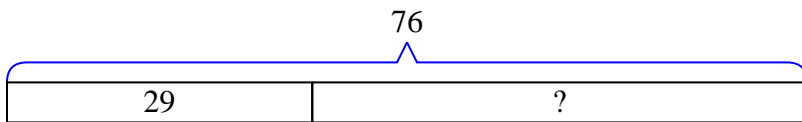
- 3) A store had 51 sodas on Monday. If they sold 41 of them on Tuesday, how many would they have left on Wednesday?



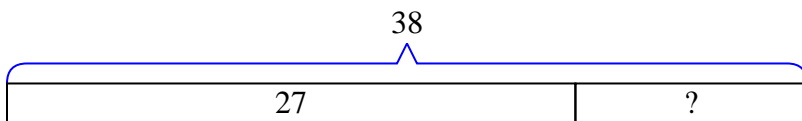
- 4) Frank and Isabel have 44 books. Isabel has 26. How many books does Frank have?



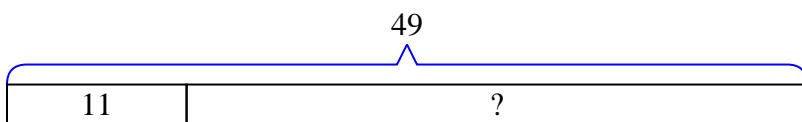
- 5) Emily had 76 pieces of paper in her folder. She used 29 pieces. How many pieces does she have now?



- 6) A museum had 38 paintings. If they got rid of 27 of them, how many pictures would they have left?



- 7) Amy's hair was 49 centimeters long. If she cut off 11 centimeters, how long is her hair now?

Answers1. 112. 473. 104. 185. 476. 117. 38