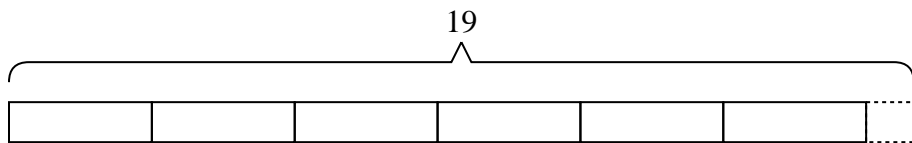




Solve each problem.

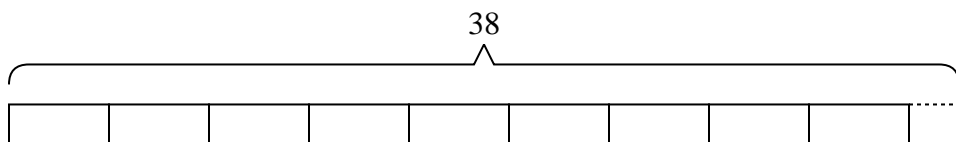
**Answers**

- 1) It takes {three} grams of plastic to make a ruler. If a company had {nineteen} grams of plastic, how many entire rulers could they make?



1. \_\_\_\_\_

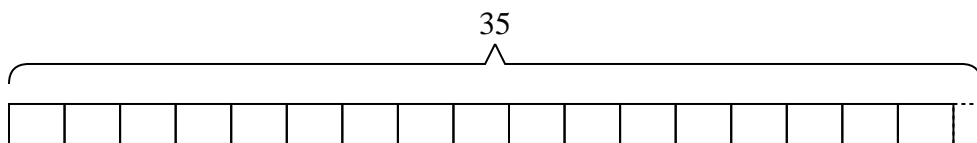
- 2) Olivia is making bead necklaces. She wants to use {thirty-eight} beads to make {four} necklaces. If she wants each necklace to have the same number of beads, how many beads will she have left over?



2. \_\_\_\_\_

3. \_\_\_\_\_

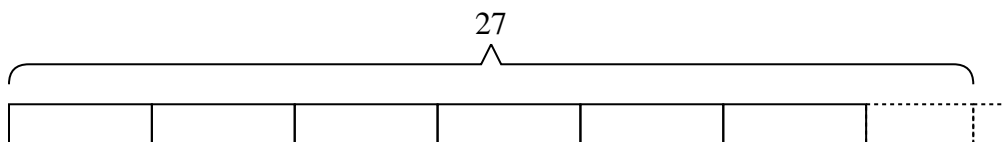
- 3) A new video game console needs {two} computer chips. If a machine can create {thirty-five} computer chips a day, how many video game consoles can be created in a day?



4. \_\_\_\_\_

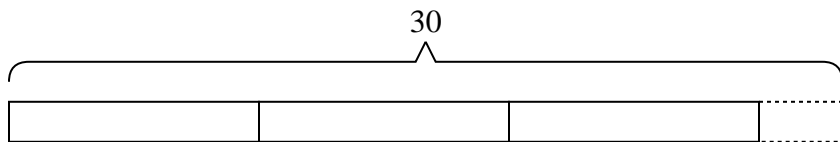
5. \_\_\_\_\_

- 4) A school had {twenty-seven} students sign up for the trivia teams. If they wanted to have {four} team, with the same number of students on each team, how many more students would need to sign up?

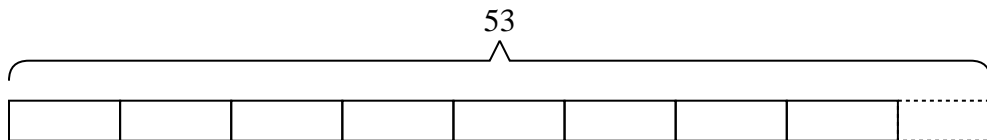


6. \_\_\_\_\_

- 5) A coat factory had {thirty} coats. If they wanted to put them into {nine} boxes, with the same number of coats in each box, how many extra coats would they have left over?



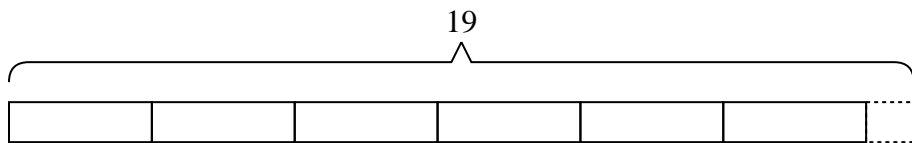
- 6) Haley had {fifty-three} photos to put into a photo album. If each page holds {six} photos, how many full pages will she have?



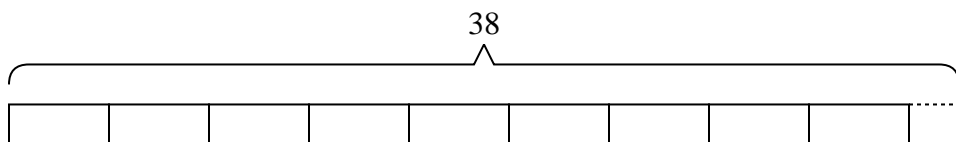


Solve each problem.

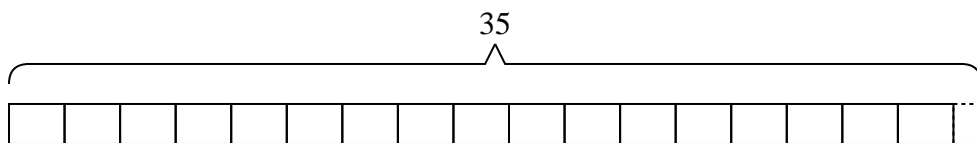
- 1) It takes {three} grams of plastic to make a ruler. If a company had {nineteen} grams of plastic, how many entire rulers could they make?



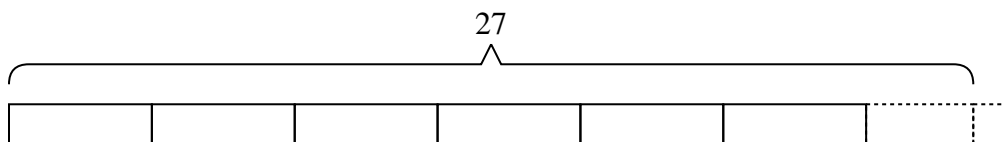
- 2) Olivia is making bead necklaces. She wants to use {thirty-eight} beads to make {four} necklaces. If she wants each necklace to have the same number of beads, how many beads will she have left over?



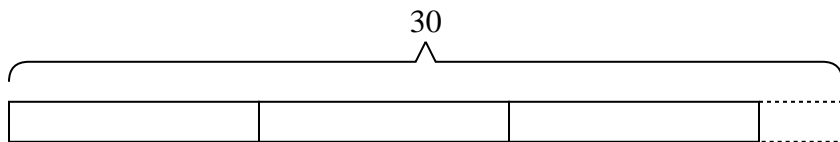
- 3) A new video game console needs {two} computer chips. If a machine can create {thirty-five} computer chips a day, how many video game consoles can be created in a day?



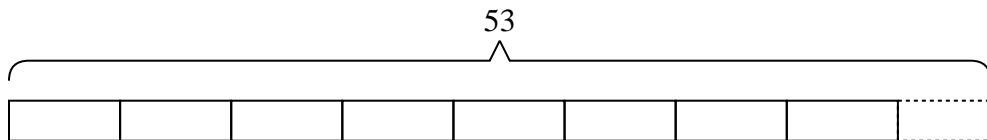
- 4) A school had {twenty-seven} students sign up for the trivia teams. If they wanted to have {four} team, with the same number of students on each team, how many more students would need to sign up?



- 5) A coat factory had {thirty} coats. If they wanted to put them into {nine} boxes, with the same number of coats in each box, how many extra coats would they have left over?



- 6) Haley had {fifty-three} photos to put into a photo album. If each page holds {six} photos, how many full pages will she have?



Answers

1. 6

2. 2

3. 17

4. 1

5. 3

6. 8