



Determine if the angle shown is 'less', 'more' or 'equal' to 90°.

Answers

Ex)



1)



2)



Ex. **equal**

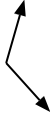
1. _____

2. _____

3)



4)



5)



3. _____

4. _____

5. _____

6)



7)



8)



6. _____

7. _____

8. _____

9)



10)



11)

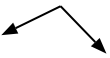


9. _____

10. _____

11. _____

12)



13)



14)



12. _____

13. _____

14. _____

15)



16)



17)



15. _____

16. _____

17. _____

18)



19)



20)



18. _____

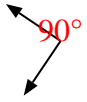
19. _____

20. _____



Determine if the angle shown is 'less', 'more' or 'equal' to 90°.

Ex)



1)



2)



Ex. equal

3)



4)

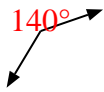


5)



1. more

6)



7)



8)



2. less

9)



10)

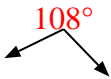


11)



3. less

12)



13)



14)



4. more

15)



16)

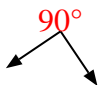


17)



5. more

18)



19)



20)



6. more

7. equal

8. less

9. less

10. less

11. equal

12. more

13. less

14. less

15. equal

16. more

17. more

18. equal

19. equal

20. equal



Determine if the angle shown is 'less', 'more' or 'equal' to 90°.

Answers

Ex)



1)



2)



Ex. less

1. _____

2. _____

3)



4)



5)



3. _____

4. _____

6)



7)



8)

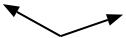


5. _____

6. _____

7. _____

9)



10)



11)



8. _____

9. _____

10. _____

12)



13)



14)

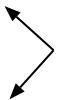


11. _____

12. _____

13. _____

15)



16)



17)



14. _____

15. _____

16. _____

18)



19)



20)



17. _____

18. _____

19. _____

20. _____



Determine if the angle shown is 'less', 'more' or 'equal' to 90°.

Ex)



1)



2)



Ex. less

3)



4)



5)



1. equal

2. less

3. less

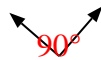
4. less

5. less

6)



7)



8)



6. less

7. equal

9)



10)



11)



8. more

9. more

10. less

11. equal

12)



13)



14)

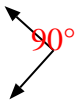


12. equal

13. more

14. less

15)



16)



17)



15. equal

16. equal

17. more

18)



19)



20)



18. more

19. equal

20. more



Determine if the angle shown is 'less', 'more' or 'equal' to 90°.

Answers

Ex)



1)



2)



Ex. **less**

1. _____

3)



4)



5)



2. _____

3. _____

6)



7)



8)



4. _____

5. _____

6. _____

9)



10)



11)




7. _____

8. _____

9. _____

12)



13)



14)



10. _____

11. _____

12. _____

13. _____

15)



16)



17)



14. _____

15. _____

16. _____

18)



19)



20)



17. _____

18. _____

19. _____

20. _____

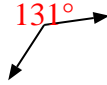


Determine if the angle shown is 'less', 'more' or 'equal' to 90° .

Ex)



1)



2)

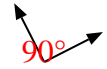


Ex. less

3)



4)



5)



1. more

2. more

3. less

4. equal

5. more

6. equal

7. equal

8. equal

9. more

10. less

11. equal

12. more

13. more

14. less

15. less

16. equal

17. less

18. equal


19. more

20. equal

6)



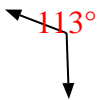
7)



8)



9)



10)



11)



12)



13)



14)



15)



16)



17)



18)



19)



20)





Determine if the angle shown is 'less', 'more' or 'equal' to 90°.

Answers

Ex)



1)



2)



Ex. **equal**

1. _____

2. _____

3)



4)



5)

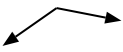


3. _____

4. _____

5. _____

6)



7)



8)



6. _____

7. _____

8. _____

9)



10)



11)



9. _____

10. _____

11. _____

12)



13)



14)



12. _____

13. _____

14. _____

15)



16)



17)



15. _____

16. _____

17. _____

18)



19)



20)



18. _____

19. _____

20. _____



Determine if the angle shown is 'less', 'more' or 'equal' to 90° .

Ex)



1)



2)



Answers

Ex. equal

1. equal

2. less

3. less

4. equal

5. equal

6. more

7. more

8. less

9. more

10. equal

11. more

12. less

13. more

14. equal

15. less

16. more

17. equal

18. less

19. equal

20. less

3)



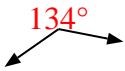
4)



5)



6)



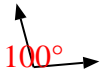
7)



8)



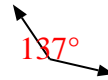
9)



10)



11)



12)



13)



14)



15)



16)



17)



18)



19)



20)





Determine if the angle shown is 'less', 'more' or 'equal' to 90°.

Answers

Ex)



1)



2)

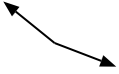


Ex. less

1. _____

2. _____

3)



4)



5)

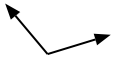


3. _____

4. _____

5. _____

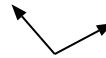
6)



7)



8)



6. _____

7. _____

8. _____

9)



10)



11)

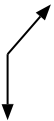


9. _____

10. _____

11. _____

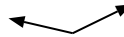
12)



13)



14)



12. _____

13. _____

14. _____

15)



16)



17)



15. _____

16. _____

17. _____

18)



19)



20)



18. _____

19. _____

20. _____



Determine if the angle shown is 'less', 'more' or 'equal' to 90°.

Ex)



1)

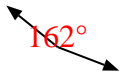


2)



Ex. less

3)



4)



5)



1. less

2. less

3. more

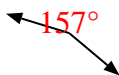
4. equal

5. less

6)



7)



8)

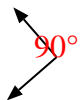


6. more

7. more

8. more

9)



10)



11)

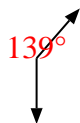


9. equal

10. less

11. less

12)



13)



14)

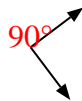


12. more

13. equal

14. more

15)



16)



17)



15. equal

16. equal

17. more

18)



19)



20)



18. equal

19. equal

20. less



Determine if the angle shown is 'less', 'more' or 'equal' to 90°.

Answers

Ex)



1)



2)



Ex. **less**

1. _____

2. _____

3)



4)



5)



3. _____

4. _____

5. _____

6)



7)



8)



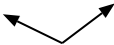
6. _____

7. _____

9)



10)



11)



8. _____

9. _____

10. _____

11. _____

12)



13)



14)



12. _____

13. _____

14. _____

15)



16)



17)



15. _____

16. _____

17. _____

18)



19)



20)









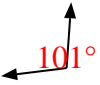

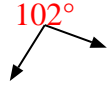

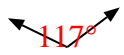




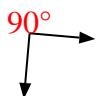


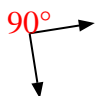


18. _____

19. _____

20. _____



Determine if the angle shown is 'less', 'more' or 'equal' to 90°.

Ex) 	1) 	2) 
3) 	4) 	5) 
6) 	7) 	8) 
9) 	10) 	11) 
12) 	13) 	14) 
15) 	16) 	17) 
18) 	19) 	20) 

Answers


- Ex. less
1. equal
2. more
3. less
4. equal
5. less
6. more
7. equal
8. more
9. less
10. more
11. equal
12. more
13. less
14. less
15. equal
16. more
17. more
18. equal
19. equal
20. equal



Determine if the angle shown is 'less', 'more' or 'equal' to 90°.

Answers

Ex)



1)



2)

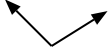


Ex. more

1. _____

2. _____

3)



4)



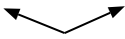
5)



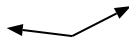
3. _____

4. _____

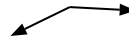
6)



7)



8)



5. _____

6. _____

7. _____

9)



10)



11)



8. _____

9. _____

10. _____

12)



13)



14)



11. _____

12. _____

13. _____

15)



16)



17)



14. _____

15. _____

16. _____

18)



19)



20)



17. _____

18. _____

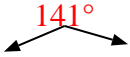
19. _____

20. _____



Determine if the angle shown is 'less', 'more' or 'equal' to 90°.

Ex)



1)

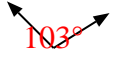


2)



Ex. more

3)



4)



5)



1. less

2. equal

3. more


4. equal

5. equal


6)



7)



8)



6. more

7. more

8. more

9)



10)



11)



9. less

10. less

11. less

12)



13)



14)



12. equal

13. less

14. equal

15)



16)



17)



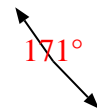
15. equal

16. more

18)



19)



20)



17. equal

18. less

19. more

20. less



Determine if the angle shown is 'less', 'more' or 'equal' to 90°.

Answers

Ex)



1)



2)



Ex. **equal**

1. _____

2. _____

3)



4)



5)



3. _____

4. _____

5. _____

6)



7)



8)



6. _____

7. _____

9)



10)



11)



8. _____

9. _____

10. _____

12)



13)



14)



11. _____

12. _____

13. _____

15)



16)



17)



14. _____

15. _____

16. _____

18)



19)



20)



17. _____

18. _____

19. _____

20. _____



Determine if the angle shown is 'less', 'more' or 'equal' to 90°.

Ex)



1)



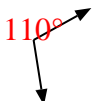
2)



Ex.

equal

3)



4)



5)



1.

more

2.

less

3.

more

4.

less

5.

less

6)



7)



8)



6.

more

7.

equal

9)



10)



11)



8.

more

9.

equal

10.

less

11.

equal

12)



13)



14)



12.

less

13.

less

14.

more

15)



16)



17)



15.

less

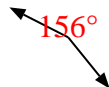
16.

equal

18)



19)



20)



17.

equal

18.

less

19.

more

20.

equal



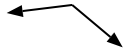
Determine if the angle shown is 'less', 'more' or 'equal' to 90°.

Answers

Ex)



1)



2)



Ex. **equal**

1. _____

2. _____

3)



4)



5)



3. _____

4. _____

6)



7)



8)



5. _____

6. _____

7. _____

9)



10)



11)



8. _____

9. _____

10. _____

12)



13)



14)



11. _____

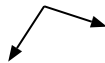
12. _____

13. _____

15)



16)



17)



14. _____

15. _____

16. _____

18)



19)



20)



17. _____

18. _____

19. _____

20. _____

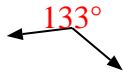


Determine if the angle shown is 'less', 'more' or 'equal' to 90°.

Ex)



1)



2)



Ex. equal

3)



4)



5)



1. more

2. equal

3. less

4. equal

5. less

6)



7)



8)



6. less

7. more

9)



10)



11)



8. less

9. less

10. less

11. equal

12)



13)



14)



12. more

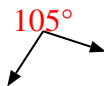
13. equal

14. more

15)



16)



17)



15. equal

16. more

17. equal

18)



19)



20)



18. less

19. equal

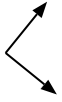
20. less



Determine if the angle shown is 'less', 'more' or 'equal' to 90°.

Answers

Ex)



1)



2)



Ex. **equal**

1. _____

2. _____

3)



4)



5)



3. _____

4. _____

6)



7)



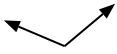
8)



5. _____

6. _____

9)



10)



11)



7. _____

8. _____

12)



13)



14)



9. _____

10. _____

11. _____

12. _____

13. _____

15)



16)



17)



14. _____

15. _____

16. _____

18)



19)



20)



17. _____

18. _____

19. _____

20. _____



Determine if the angle shown is 'less', 'more' or 'equal' to 90° .

Ex)



1)



2)



Ex.

equal

3)



4)



5)



1.

equal

2.

less

3.

less

4.

more

5.

more

6)



7)



8)



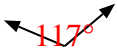
6.

less

7.

less

9)



10)



11)



8.

less

9.

more

10.

equal

11.

more

12)



13)



14)



12.

less

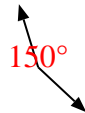
13.

equal

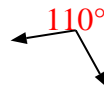
15)



16)



17)



14.

equal

15.

equal

16.

more

18)



19)



20)



17.

more

18.

less

19.

equal

20.

less