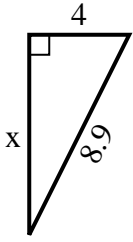


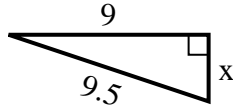


Find the value of X.

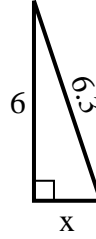
1) perimeter = 20.9 u



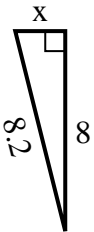
2) perimeter = 21.5 u



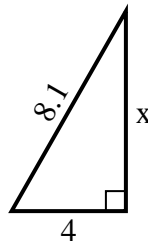
3) perimeter = 14.3 u



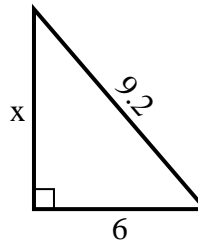
4) perimeter = 18.2 u



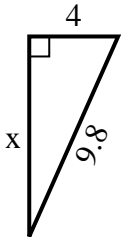
5) perimeter = 19.1 u



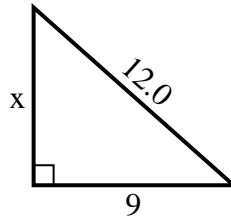
6) perimeter = 22.2 u



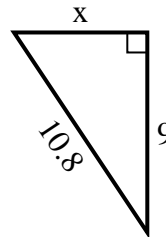
7) perimeter = 22.8 u



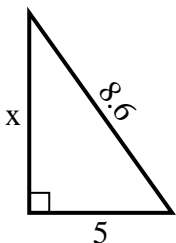
8) perimeter = 29 u



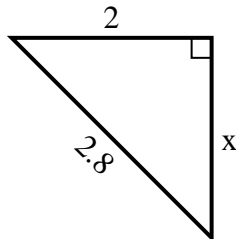
9) perimeter = 25.8 u



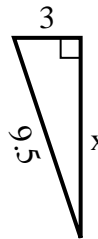
10) perimeter = 20.6 u



11) perimeter = 6.8 u



12) perimeter = 21.5 u



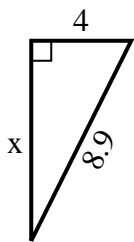
**Answers**

1. \_\_\_\_\_
2. \_\_\_\_\_
3. \_\_\_\_\_
4. \_\_\_\_\_
5. \_\_\_\_\_
6. \_\_\_\_\_
7. \_\_\_\_\_
8. \_\_\_\_\_
9. \_\_\_\_\_
10. \_\_\_\_\_
11. \_\_\_\_\_
12. \_\_\_\_\_

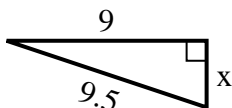


Find the value of X.

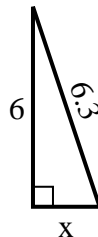
1) perimeter = 20.9 u



2) perimeter = 21.5 u



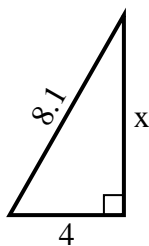
3) perimeter = 14.3 u



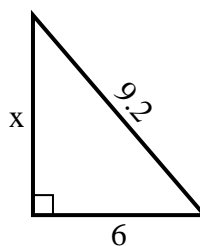
4) perimeter = 18.2 u



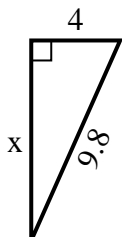
5) perimeter = 19.1 u



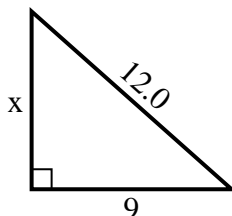
6) perimeter = 22.2 u



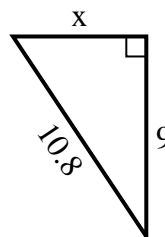
7) perimeter = 22.8 u



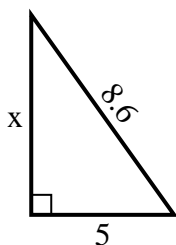
8) perimeter = 29 u



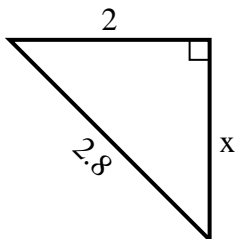
9) perimeter = 25.8 u



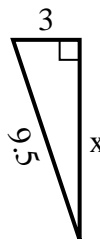
10) perimeter = 20.6 u



11) perimeter = 6.8 u



12) perimeter = 21.5 u



Answers

1. 8

2. 3

3. 2

4. 2

5. 7

6. 7

7. 9

8. 8

9. 6

10. 7

11. 2

12. 9