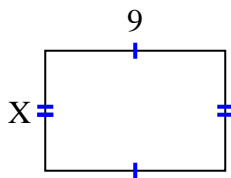


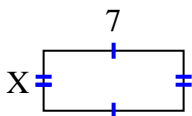


Find the value of X for each figure. Each figure is in centimeters (cm). Not to scale.

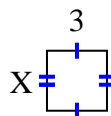
1) area =  $54 \text{ cm}^2$



2) area =  $21 \text{ cm}^2$



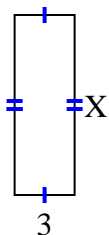
3) area =  $9 \text{ cm}^2$



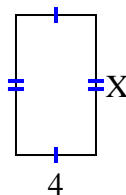
4) area =  $4 \text{ cm}^2$



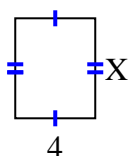
5) area =  $27 \text{ cm}^2$



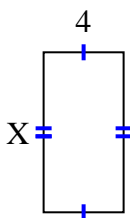
6) area =  $28 \text{ cm}^2$



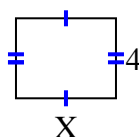
7) area =  $20 \text{ cm}^2$



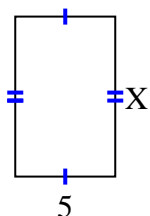
8) area =  $32 \text{ cm}^2$



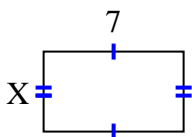
9) area =  $20 \text{ cm}^2$



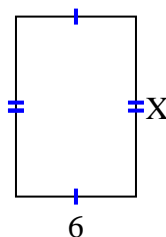
10) area =  $40 \text{ cm}^2$



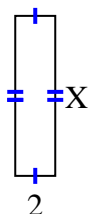
11) area =  $28 \text{ cm}^2$



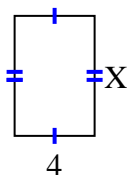
12) area =  $54 \text{ cm}^2$



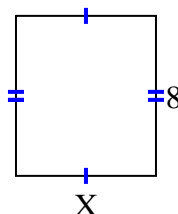
13) area =  $16 \text{ cm}^2$



14) area =  $24 \text{ cm}^2$



15) area =  $56 \text{ cm}^2$



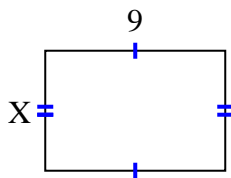
**Answers**

1. \_\_\_\_\_
2. \_\_\_\_\_
3. \_\_\_\_\_
4. \_\_\_\_\_
5. \_\_\_\_\_
6. \_\_\_\_\_
7. \_\_\_\_\_
8. \_\_\_\_\_
9. \_\_\_\_\_
10. \_\_\_\_\_
11. \_\_\_\_\_
12. \_\_\_\_\_
13. \_\_\_\_\_
14. \_\_\_\_\_
15. \_\_\_\_\_

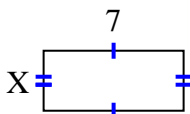


Find the value of X for each figure. Each figure is in centimeters (cm). Not to scale.

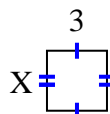
1) area =  $54 \text{ cm}^2$



2) area =  $21 \text{ cm}^2$



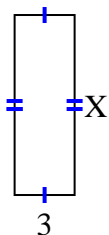
3) area =  $9 \text{ cm}^2$



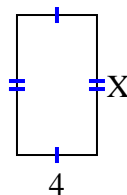
4) area =  $4 \text{ cm}^2$



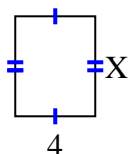
5) area =  $27 \text{ cm}^2$



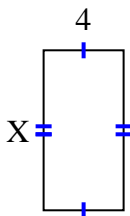
6) area =  $28 \text{ cm}^2$



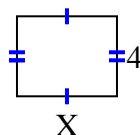
7) area =  $20 \text{ cm}^2$



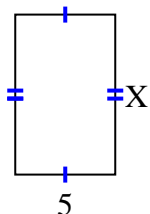
8) area =  $32 \text{ cm}^2$



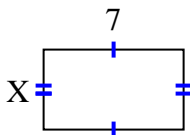
9) area =  $20 \text{ cm}^2$



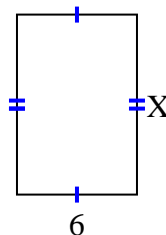
10) area =  $40 \text{ cm}^2$



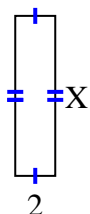
11) area =  $28 \text{ cm}^2$



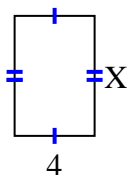
12) area =  $54 \text{ cm}^2$



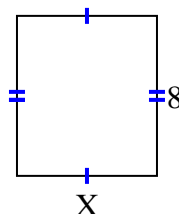
13) area =  $16 \text{ cm}^2$



14) area =  $24 \text{ cm}^2$



15) area =  $56 \text{ cm}^2$



Answers

1. 6

2. 3

3. 3

4. 2

5. 9

6. 7

7. 5

8. 8

9. 5

10. 8

11. 4

12. 9

13. 8

14. 6

15. 7